

QUESTION PAPER SET NO. 8

CLASS 4 MATHEMATICS

1	3_18 Mathematics 3186	A Trip to Bhopal	In which of these numbers does 3 have the greatest place value?		C
	Answer Options				
	Option A	Option B	Option C	Option D	
	136	239	301	743	

2

C

3_18

Mathematics

3190

A Trip to
Bhopal

807 + what number =
957?

Answer Options

Option A

Option B

Option C

Option D


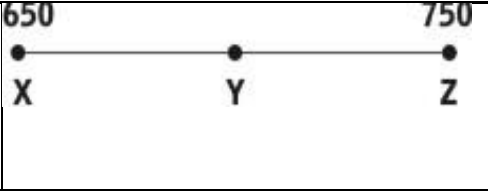
15

50

150

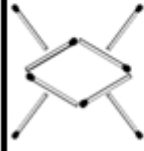





157


3	<p>3_18 Mathematics 3197</p>	<p>A Trip to Bhopal</p>	<p>40 tens + 6 tens + 3 ones + 20 ones equal</p>		<p>B</p>												
<table border="1" style="width: 100%; text-align: center;"> <tr> <td colspan="4" data-bbox="208 655 2098 826">Answer Options</td> </tr> <tr> <td data-bbox="208 826 656 997">Option A</td> <td data-bbox="656 826 1088 997">Option B</td> <td data-bbox="1088 826 1523 997">Option C</td> <td data-bbox="1523 826 2098 997">Option D</td> </tr> <tr> <td data-bbox="208 997 656 1173">Sixty nine</td> <td data-bbox="656 997 1088 1173">Four hundred and eighty three</td> <td data-bbox="1088 997 1523 1173">Six hundred and nine</td> <td data-bbox="1523 997 2098 1173">Six hundred and ninety</td> </tr> </table>						Answer Options				Option A	Option B	Option C	Option D	Sixty nine	Four hundred and eighty three	Six hundred and nine	Six hundred and ninety
Answer Options																	
Option A	Option B	Option C	Option D														
Sixty nine	Four hundred and eighty three	Six hundred and nine	Six hundred and ninety														

4	5_28 Mathematics 9890	A Trip to Bhopal	Mitali says: What could be the actual cost of Mitali's book?		B										
		<table border="1"> <thead> <tr> <th colspan="4">Answer Options</th> </tr> <tr> <th>Option A</th> <th>Option B</th> <th>Option C</th> <th>Option D</th> </tr> </thead> <tbody> <tr> <td>Rs. 110</td> <td>Rs. 198</td> <td>Rs. 250</td> <td>Rs. 301</td> </tr> </tbody> </table>				Answer Options				Option A	Option B	Option C	Option D	Rs. 110	Rs. 198
Answer Options															
Option A	Option B	Option C	Option D												
Rs. 110	Rs. 198	Rs. 250	Rs. 301												
5	5_29 Mathematic 11499	A Trip to Bhopal	A part of the number line is shown below. Which of these numbers lies between points Y and Z?		C										
		<table border="1"> <thead> <tr> <th colspan="4">Answer Options</th> </tr> <tr> <th>Option A</th> <th>Option B</th> <th>Option C</th> <th>Option D</th> </tr> </thead> <tbody> <tr> <td>645</td> <td>695</td> <td>745</td> <td>754</td> </tr> </tbody> </table>				Answer Options				Option A	Option B	Option C	Option D	645	695
Answer Options															
Option A	Option B	Option C	Option D												
645	695	745	754												

6	3_19 Mathematics 2575	A Trip to Bhopal	Which of the following numbers is nearest to 250?					D	
			Answer Options						
			Option A	Option B	Option C			Option D	
			200	260	258			244	
7	3_19 Mathematics 2602	A Trip to Bhopal	<p>The plan below shows the doors of Rooms 301 to 310 of a hotel. After coming out of the lift, Taruna turns left, then right and then right once again. Which room will she reach?</p>					A	
			Answer Options						
			Option A	Option B	Option C			Option D	
			305	310	303			302	

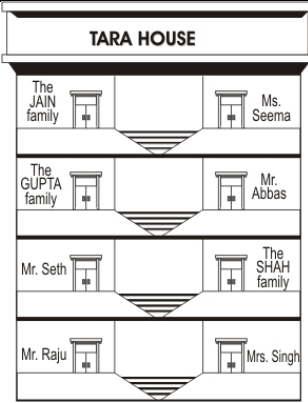
8	5_29 Mathematics 11503	A Trip to Bhopal	What is $406 - 234$?		D	
		Answer Options				
		Option A	Option B	Option C	Option D	
		232	272	132	172	
9	0_0 Mathematics 8230	A Trip to Bhopal	What comes in the blank below to make the number sentence true?	$5 \square + 3\text{tens} = 35$	A	
		Answer Options				
		Option A	Option B	Option C	Option D	
		Ones	tens	hundreds	0	

10	1_4 Mathematics 5701	A Trip to Bhopal	Instead of digits in ones and tens place, pictures are given in the question. Which of the following could be the correct number?	<table border="1" style="margin: auto;"> <tr> <td style="text-align: center;">TENS</td> <td style="text-align: center;">ONES</td> </tr> <tr> <td style="text-align: center;"></td> <td style="text-align: center;"></td> </tr> </table>	TENS	ONES			C
TENS	ONES								
									
Answer Options									
Option A		Option B		Option C	Option D				
76		60		85	47				

11	3_18 Mathematics 3213	A TRIP TO BHOPAL	Who stays two floors above Mr. Raju but NOT just below the Jain family?		C
----	-----------------------------	---------------------	--	---	---

Answer Options

Option A	Option B	Option C	Option D
Ms. Seema	The Gupta family	Mr. Abbas	The Seth family

12	3_18 Mathematics 3212	A TRIP TO BHOPAL	The flats have a lift that shows '0' when it is at Mrs. Singh's floor. Which button should Ms. Seema press to go up to her flat?		C
----	---------------------------------	---------------------	--	--	---

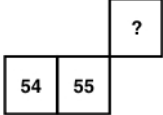
Answer Options

Option A	Option B	Option C	Option D
0	1	3	4

13	3_18 Mathematics 3185	A TRIP TO BHOPAL	904 - 470 is		D
----	---------------------------------	---------------------	--------------	--	---

Answer Options				
Option A	Option B	Option C	Option D	
574	536	534	434	

14	2_11 Mathematics 4281	A TRIP TO BHOPAL	I started with a number, subtracted 15 from it and got the answer as 30. What number did I start with?		D
Answer Options					
Option A		Option B		Option C	
15		25		30	
Option D					
45					

15	2_10 Mathematics 5719	A TRIP TO BHOPAL	If we use a counting chart horizontal inspite of vertical then what number should come in the box with the question mark inside?		C
	Answer Options				
	Option A	Option B	Option C	Option D	
	35	44	46	66	