

# QUESTION PAPER SET NO. 8

## CLASS 4 MATHEMATICS

1	3_18 Mathematics 3186	A Trip to Bhopal	In which of these numbers does 3 have the greatest place value?		C
	<b>Answer Options</b>				
	<b>Option A</b>	<b>Option B</b>	<b>Option C</b>	<b>Option D</b>	
	136	239	301	743	

2

C

3\_18

Mathematics

3190

A Trip to  
Bhopal

807 + what number =  
957?

**Answer Options**

**Option A**

**Option B**

**Option C**

**Option D**


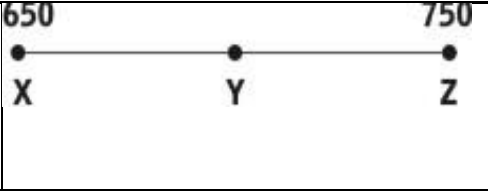
15

50

150

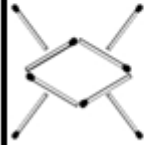





157


3	<p>3_18 Mathematics 3197</p>	<p>A Trip to Bhopal</p>	<p>40 tens + 6 tens + 3 ones + 20 ones equal</p>		<p>B</p>												
<table border="1" style="width: 100%; text-align: center;"> <tr> <td colspan="4" data-bbox="208 655 2098 826"><b>Answer Options</b></td> </tr> <tr> <td data-bbox="208 826 656 997"><b>Option A</b></td> <td data-bbox="656 826 1088 997"><b>Option B</b></td> <td data-bbox="1088 826 1523 997"><b>Option C</b></td> <td data-bbox="1523 826 2098 997"><b>Option D</b></td> </tr> <tr> <td data-bbox="208 997 656 1173">Sixty nine</td> <td data-bbox="656 997 1088 1173">Four hundred and eighty three</td> <td data-bbox="1088 997 1523 1173">Six hundred and nine</td> <td data-bbox="1523 997 2098 1173">Six hundred and ninety</td> </tr> </table>						<b>Answer Options</b>				<b>Option A</b>	<b>Option B</b>	<b>Option C</b>	<b>Option D</b>	Sixty nine	Four hundred and eighty three	Six hundred and nine	Six hundred and ninety
<b>Answer Options</b>																	
<b>Option A</b>	<b>Option B</b>	<b>Option C</b>	<b>Option D</b>														
Sixty nine	Four hundred and eighty three	Six hundred and nine	Six hundred and ninety														

4	5_28 Mathematics 9890	A Trip to Bhopal	Mitali says: What could be the actual cost of Mitali's book?		B										
		<table border="1"> <thead> <tr> <th colspan="4">Answer Options</th> </tr> <tr> <th>Option A</th> <th>Option B</th> <th>Option C</th> <th>Option D</th> </tr> </thead> <tbody> <tr> <td>Rs. 110</td> <td>Rs. 198</td> <td>Rs. 250</td> <td>Rs. 301</td> </tr> </tbody> </table>				Answer Options				Option A	Option B	Option C	Option D	Rs. 110	Rs. 198
Answer Options															
Option A	Option B	Option C	Option D												
Rs. 110	Rs. 198	Rs. 250	Rs. 301												
5	5_29 Mathematic 11499	A Trip to Bhopal	A part of the number line is shown below. Which of these numbers lies between points Y and Z?		C										
		<table border="1"> <thead> <tr> <th colspan="4">Answer Options</th> </tr> <tr> <th>Option A</th> <th>Option B</th> <th>Option C</th> <th>Option D</th> </tr> </thead> <tbody> <tr> <td>645</td> <td>695</td> <td>745</td> <td>754</td> </tr> </tbody> </table>				Answer Options				Option A	Option B	Option C	Option D	645	695
Answer Options															
Option A	Option B	Option C	Option D												
645	695	745	754												

<b>6</b>	<b>3_19 Mathematics 2575</b>	A Trip to Bhopal	Which of the following numbers is nearest to 250?		<b>D</b>	
			<b>Answer Options</b>			
			Option A	Option B	Option C	Option D
			200	260	258	244
<b>7</b>	<b>3_19 Mathematics 2602</b>	A Trip to Bhopal	<p>The plan below shows the doors of Rooms 301 to 310 of a hotel. After coming out of the lift, Taruna turns left, then right and then right once again. Which room will she reach?</p>		<b>A</b>	
			<b>Answer Options</b>			
			Option A	Option B	Option C	Option D
			305	310	303	302

<b>8</b>	<b>5_29 Mathematics 11503</b>	A Trip to Bhopal	What is $406 - 234$ ?			<b>D</b>
		<b>Answer Options</b>				
		Option A	Option B	Option C	Option D	
		232	272	132	172	
<b>9</b>	<b>0_0 Mathematics 8230</b>	A Trip to Bhopal	What comes in the blank below to make the number sentence true?		$5 \square + 3\text{tens} = 35$	<b>A</b>
		<b>Answer Options</b>				
		Option A	Option B	Option C	Option D	
		Ones	tens	hundreds	0	

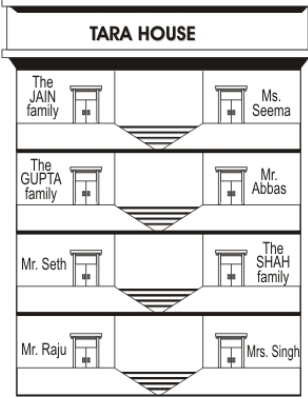
10	1_4 Mathematics 5701	A Trip to Bhopal	Instead of digits in ones and tens place, pictures are given in the question. Which of the following could be the correct number?	<table border="1" style="margin: auto;"> <tr> <td style="text-align: center; padding: 5px;"><b>TENS</b></td> <td style="text-align: center; padding: 5px;"><b>ONES</b></td> </tr> <tr> <td style="text-align: center; padding: 10px;">  </td> <td style="text-align: center; padding: 10px;">  </td> </tr> </table>	<b>TENS</b>	<b>ONES</b>			C
<b>TENS</b>	<b>ONES</b>								
									
<b>Answer Options</b>									
<b>Option A</b>		<b>Option B</b>		<b>Option C</b>	<b>Option D</b>				
76		60		85	47				

11	3_18 Mathematics 3213	A TRIP TO BHOPAL	Who stays two floors above Mr. Raju but NOT just below the Jain family?		C
----	-----------------------------	---------------------	--	---	---

**Answer Options**

<b>Option A</b>	<b>Option B</b>	<b>Option C</b>	<b>Option D</b>
Ms. Seema	The Gupta family	Mr. Abbas	The Seth family



12	3_18 Mathematics  3212	A TRIP TO BHOPAL	The flats have a lift that shows '0' when it is at Mrs. Singh's floor. Which button should Ms. Seema press to go up to her flat?		C
----	---------------------------------	---------------------	---	---	---

**Answer Options**

Option A	Option B	Option C	Option D
0	1	3	4

13	3_18 Mathematics  3185	A TRIP TO BHOPAL	904 - 470 is		D
----	---------------------------------	---------------------	--------------	--	---

<b>Answer Options</b>				
<b>Option A</b>	<b>Option B</b>	<b>Option C</b>	<b>Option D</b>	
574	536	534	434	

14	2_11 Mathematics  4281	A TRIP TO BHOPAL	I started with a number, subtracted 15 from it and got the answer as 30. What number did I start with?		D
<b>Answer Options</b>					
<b>Option A</b>	<b>Option B</b>	<b>Option C</b>	<b>Option D</b>		
15	25	30	45		

15	2_10 Mathematics  5719	A TRIP TO BHOPAL	If we use a counting chart horizontal inspite of vertical then what number should come in the box with the question mark inside?		C
	<b>Answer Options</b>				
	<b>Option A</b>	<b>Option B</b>	<b>Option C</b>	<b>Option D</b>	
	35	44	46	66	