













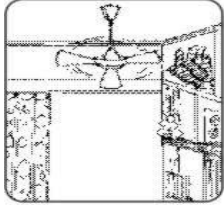

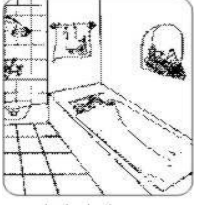
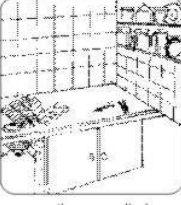























S.N	Folder Number & Question Code	Topic	Question with Answer Options	Image (If Any)	Correct Answer (Option-A, B, C, D)										
1	3_15 Science 3452	Valley of Flowers Ch-11	The table gives the number of roses of different colours seen in a garden. Which would be the graph showing the details correctly?	<table border="1"> <thead> <tr> <th>Colours</th> <th>No of flowers</th> </tr> </thead> <tbody> <tr> <td>Pink</td> <td>16</td> </tr> <tr> <td>Orange</td> <td>4</td> </tr> <tr> <td>Red</td> <td>12</td> </tr> <tr> <td>Yellow</td> <td>8</td> </tr> </tbody> </table>	Colours	No of flowers	Pink	16	Orange	4	Red	12	Yellow	8	D
				Colours	No of flowers										
Pink	16														
Orange	4														
Red	12														
Yellow	8														
<table border="1"> <thead> <tr> <th colspan="4">Answer Options</th> </tr> <tr> <th>Option A</th> <th>Option B</th> <th>Option C</th> <th>Option D</th> </tr> </thead> <tbody> <tr> <td> </td> <td> </td> <td> </td> <td> </td> </tr> </tbody> </table>	Answer Options				Option A	Option B	Option C	Option D							
Answer Options															
Option A	Option B	Option C	Option D												
2	4_23 Science 8934	Valley of Flowers Ch-11	<p>Ram had seen a plant and he wanted Arjun to guess the name of the plant. Given below is the question answer session between the two of them.</p> <p>Arjun: Does the plant give shade?                      Ram: No</p> <p>Arjun: Does the plant have thorns?                      Ram: No</p> <p>Arjun: Does the plant bear flowers?                      Ram : Yes</p> <p>Arjun: What is the colour of the flowers? Ram: White</p> <p>Arjun: Does the flower have a sweet smell? Ram: Yes.</p> <p>Which is the plant that Ram is describing?</p>		D										
						<table border="1"> <thead> <tr> <th colspan="4">Answer Options</th> </tr> <tr> <th>Option A</th> <th>Option B</th> <th>Option C</th> <th>Option D</th> </tr> </thead> <tbody> <tr> <td>Rose</td> <td>Hibiscus</td> <td>Bougainvillea</td> <td>Jasmine</td> </tr> </tbody> </table>	Answer Options				Option A	Option B	Option C	Option D	Rose
Answer Options															
Option A	Option B	Option C	Option D												
Rose	Hibiscus	Bougainvillea	Jasmine												

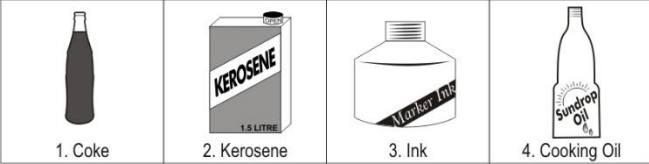
S. N	Folder Number & Question Code	Topic	Question with Answer Options	Image (If Any)	Correct Answer (Option-A, B, C, D)		
3	4_24 Science 10181	Valley of Flowers Ch-11	Every day Ravi observes and draws the shape of the moon. On the 21st July Ravi copied the shape of the moon as shown in the figure below. After about how many days will Ravi see the same shape next?		B		
<b>Answer Options</b>							
Option A		Option B		Option C		Option D	
14 days		28 days		2 months		1 year	
4	4_25 Science 10659	VALLEY OF FLOWERS Ch-11	Sushila wanted to know if her marigold plants would grow better in the sun. What would be the best way to find out?		A		
<b>Answer Options</b>							
Option A		Option B		Option C		Option D	
 <p>A.</p>		 <p>B.</p>		 <p>C.</p>		 <p>D.</p>	


S. N	Folder Number & Question Code	Topic	Question with Answer Options	Image (If Any)	Correct Answer (Option-A, B, C, D)			
5	3_15 Science 3443	Changing Times Ch-12	Which of these objects will be attracted to a magnet?		B			
				<b>Answer Options</b>				
				Option A		Option B	Option C	Option D
A.	B.	C.	D.					
				   				
6	3_16 Science 2290	Changing Times Ch-12	Which of these properties is common to all the materials listed below?	Rubber	Paper	Sponge	Cloth	D
				<b>Answer Options</b>				
				Option A	Option B	Option C	Option D	
				They do not get wet in water.	They break if dropped.	They can be eaten by people.	They change shape if pressed.	

S. N	Folder Number & Question Code	Topic	Question with Answer Options	Image (If Any)	Correct Answer (Option-A, B, C, D)				
7	3_17 Science 1611	Changing Times Ch-12	The tool shown in the figure would be BEST used		B				
						<b>Answer Options</b>			
						Option A	Option B	Option C	Option D
						to tighten a screw.	to force a nail into a wall.	as a paperweight.	to smoothen surfaces.
8	4_23 Science 8950	Changing Times Ch-12	Which of the following time keeping devices would be MOST suitable to measure the time taken for a 100 m race?		C				
						<b>Answer Options</b>			
						Option A	Option B	Option C	Option D
									

S. N	Folder Number & Question Code	Topic	Question with Answer Options	Image (If Any)	Correct Answer (Option-A, B, C, D)												
9	4_24 Science 10175	Changing Times Ch-12	The festival of Diwali is on 1 November. Swati and Supriya's parents bought crackers for Diwali in the first week of October. Which of the following is the BEST way to store the crackers?		A												
<table border="1" style="width: 100%; text-align: center;"> <thead> <tr> <th colspan="4" data-bbox="636 613 1934 654">Answer Options</th> </tr> <tr> <th data-bbox="636 654 978 695">Option A</th> <th data-bbox="978 654 1297 695">Option B</th> <th data-bbox="1297 654 1619 695">Option C</th> <th data-bbox="1619 654 1934 695">Option D</th> </tr> </thead> <tbody> <tr> <td data-bbox="636 695 978 922">  <p data-bbox="720 911 812 927">on the shelf</p> </td> <td data-bbox="978 695 1297 922">  <p data-bbox="1014 911 1171 927">near the kitchen stove</p> </td> <td data-bbox="1297 695 1619 922">  <p data-bbox="1350 911 1465 927">in the bathroom</p> </td> <td data-bbox="1619 695 1934 922">  <p data-bbox="1654 911 1791 927">near the gas cylinder</p> </td> </tr> </tbody> </table>						Answer Options				Option A	Option B	Option C	Option D	 <p data-bbox="720 911 812 927">on the shelf</p>	 <p data-bbox="1014 911 1171 927">near the kitchen stove</p>	 <p data-bbox="1350 911 1465 927">in the bathroom</p>	 <p data-bbox="1654 911 1791 927">near the gas cylinder</p>
Answer Options																	
Option A	Option B	Option C	Option D														
 <p data-bbox="720 911 812 927">on the shelf</p>	 <p data-bbox="1014 911 1171 927">near the kitchen stove</p>	 <p data-bbox="1350 911 1465 927">in the bathroom</p>	 <p data-bbox="1654 911 1791 927">near the gas cylinder</p>														
10	3_15 Science 3430	Changing Times Ch-12	Which object below belongs to Jar Q?		C												
<table border="1" style="width: 100%; text-align: center;"> <thead> <tr> <th colspan="4" data-bbox="636 1174 1906 1214">Answer Options</th> </tr> <tr> <th data-bbox="636 1214 953 1255">Option A</th> <th data-bbox="953 1214 1276 1255">Option B</th> <th data-bbox="1276 1214 1598 1255">Option C</th> <th data-bbox="1598 1214 1906 1255">Option D</th> </tr> </thead> <tbody> <tr> <td data-bbox="636 1255 953 1450">  </td> <td data-bbox="953 1255 1276 1450">  </td> <td data-bbox="1276 1255 1598 1450">  </td> <td data-bbox="1598 1255 1906 1450">  </td> </tr> </tbody> </table>						Answer Options				Option A	Option B	Option C	Option D				
Answer Options																	
Option A	Option B	Option C	Option D														
																	

S. N	Folder Number & Question Code	T op ic	Question with Answer Options	Image (If Any)	Correct Answer (Option- A, B, C, D)												
11	1_3 Science 7216	Changing Times Ch-12	In a story, three pigs build houses to live in so that the wolf would not eat them. Here is the list of materials the pigs used for building the house. The wolf comes along and blows hard on each house. Which house will be the hardest for the wolf to blow	<table border="1"> <tr> <td>Pig 1</td> <td>Straw</td> </tr> <tr> <td>Pig 2</td> <td>Wood</td> </tr> <tr> <td>Pig 3</td> <td>Bricks</td> </tr> </table>	Pig 1	Straw	Pig 2	Wood	Pig 3	Bricks	C						
Pig 1	Straw																
Pig 2	Wood																
Pig 3	Bricks																
<table border="1"> <thead> <tr> <th colspan="4">Answer Options</th> </tr> <tr> <th>Option A</th> <th>Option B</th> <th>Option C</th> <th>Option D</th> </tr> </thead> <tbody> <tr> <td>The straw house</td> <td>The wood house</td> <td>The brick house</td> <td>All the houses will be difficult for the wolf to blow down.</td> </tr> </tbody> </table>						Answer Options				Option A	Option B	Option C	Option D	The straw house	The wood house	The brick house	All the houses will be difficult for the wolf to blow down.
Answer Options																	
Option A	Option B	Option C	Option D														
The straw house	The wood house	The brick house	All the houses will be difficult for the wolf to blow down.														
12	2_10 4041	Changing Times Ch-12	Sabina's mother separated certain objects into two groups. Which question did she probably ask to separate them?	<table border="1"> <tr> <td>Group 1</td> <td>Temple bell, Steel glass, Metal grill.</td> </tr> <tr> <td>Group 2</td> <td>Wood piece, Thread, Bulb</td> </tr> </table>	Group 1	Temple bell, Steel glass, Metal grill.	Group 2	Wood piece, Thread, Bulb	D								
Group 1	Temple bell, Steel glass, Metal grill.																
Group 2	Wood piece, Thread, Bulb																
<table border="1"> <thead> <tr> <th colspan="4">Answers Options</th> </tr> <tr> <th>Option A</th> <th>Option B</th> <th>Option C</th> <th>Option D</th> </tr> </thead> <tbody> <tr> <td>Does it break easily if dropped?</td> <td>Can it be used for measuring?</td> <td>Is it a man-made object?</td> <td>Does it make a loud sound if struck?</td> </tr> </tbody> </table>						Answers Options				Option A	Option B	Option C	Option D	Does it break easily if dropped?	Can it be used for measuring?	Is it a man-made object?	Does it make a loud sound if struck?
Answers Options																	
Option A	Option B	Option C	Option D														
Does it break easily if dropped?	Can it be used for measuring?	Is it a man-made object?	Does it make a loud sound if struck?														

S. N	Folder Number & Question Code	Topic	Question with Answer Options	Image (If Any)	Correct Answer (Option-A, B, C, D)			
13	3_16 Science 2300	A River's Tale Ch-13	Which of the following liquids will mix completely with water?	 <p>1. Coke      2. Kerosene      3. Ink      4. Cooking Oil</p>	C			
				<b>Answer Options</b>				
				Option A		Option B	Option C	Option D
	2 and 4 only	1, 2, and 3 only	1 and 3	1 only				
14	3_16 Science 2318	A River's Tale Ch-13	Which group consists of substances that will all dissolve in water?		C			
				<b>Answer Options</b>				
				Option A		Option B	Option C	Option D
	Sand, Mud, Instant Coffee	Sugar, Mud, Soap	Salt, Sugar, Instant Coffee	Soap, Sand, Salt				

S. N	Folder Number & Question Code	Topic	Question with Answer Options	Image (If Any)	Correct Answer (Option- A, B, C, D)												
15	3_16 Science 2305	A River's Tale Ch-13	The picture here shows the water-cycle. What is the main difference between the water in P and Q?		<b>D</b>												
<table border="1"> <thead> <tr> <th colspan="4" data-bbox="562 535 1837 576">Answer Options</th> </tr> <tr> <th data-bbox="562 576 882 633">Option A</th> <th data-bbox="882 576 1197 633">Option B</th> <th data-bbox="1197 576 1512 633">Option C</th> <th data-bbox="1512 576 1837 633">Option D</th> </tr> </thead> <tbody> <tr> <td data-bbox="562 633 882 787">P - Water is in liquid form; Q - Water is in vapour form</td> <td data-bbox="882 633 1197 787">P - Water is in vapour form; Q - Water is in liquid form</td> <td data-bbox="1197 633 1512 787">P - Water is salty to taste; Q - Water is not salty to taste.</td> <td data-bbox="1512 633 1837 787">P - Water is not salty to taste; Q - Water is salty to taste.</td> </tr> </tbody> </table>						Answer Options				Option A	Option B	Option C	Option D	P - Water is in liquid form; Q - Water is in vapour form	P - Water is in vapour form; Q - Water is in liquid form	P - Water is salty to taste; Q - Water is not salty to taste.	P - Water is not salty to taste; Q - Water is salty to taste.
Answer Options																	
Option A	Option B	Option C	Option D														
P - Water is in liquid form; Q - Water is in vapour form	P - Water is in vapour form; Q - Water is in liquid form	P - Water is salty to taste; Q - Water is not salty to taste.	P - Water is not salty to taste; Q - Water is salty to taste.														