














S.N	Folder Number & Question Code	Topic	Question with Answer Options	Image (If Any)	Correct Answer (Option-A, B, C, D)		
1	3_16 Science 2322	CH-7 FROM THE WINDOW	See these three pictures showing Vinod, Santosh and Sarah standing near the SAME tree. Which of these correctly shows the three of them together?		B		
Answer Options							
Option A		Option B		Option C		Option D	
 <p style="text-align: center;">A.</p>		 <p style="text-align: center;">B.</p>		 <p style="text-align: center;">C.</p>		 <p style="text-align: center;">D.</p>	
2	3_17 Science 1593	CH-7 FROM THEWINDOW	Smoke from factories, cars and burning of garbage causes_____?.	NIL	A		
Answer Options							
Option A		Option B		Option C		Option D	
air pollution		water pollution		sound pollution		soil pollution	

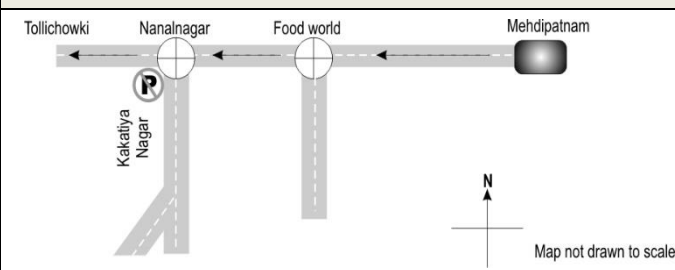
S. N	Folder Number & Question Code	Topic	Question with Answer Options	Image (If Any)	Correct Answer (Option-A, B, C, D)
3	3_17 Science 1620	CH-7 FROM THE WINDOW	Which of the following traffic signs is likely to be found near a hospital?	NIL	A




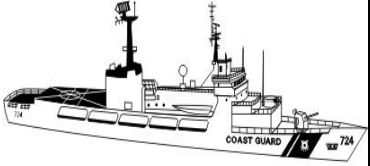
Answer Options			
Option A	Option B	Option C	Option D
			
A.	B.	C.	D.

4	4_25 Science 10667	CH-7 FROM THE WINDOW	Mangal observed the shape of the moon at three different times on one night at about 8 PM, 10 PM and 1 AM. Which of these could be the correct set of figures?	NIL	A
---	--------------------------	-------------------------	--	-----	----------

Answer Options			
Option A	Option B	Option C	Option D
			

S. N	Folder Number & Question Code	Topic	Question with Answer Options	Image (If Any)	Correct Answer (Option-A, B, C, D)				
5	4_25 Science 10661	CH-8 REACHING GRANDMOTHER'S HOUSE	Find the odd one out.	NIL	A				
						Answer Options			
						Option A	Option B	Option C	Option D
	Park	Circus	Zoo	Cinema Hall					
6	3_16 Science 2313	CH-8 REACHING GRANDMOTHER'S HOUSE	If Chandan is walking towards the rising sun and turns left, on which side will his shadow be?	NIL	B				
						Answer Options			
						Option A	Option B	Option C	Option D
	in front of him	to his left	to his right	behind him					

S. N	Folder Number & Question Code	Topic	Question with Answer Options	Image (If Any)	Correct Answer (Option-A, B, C, D)										
7	4_23 Science 8927	CH-8 REACHING GRANDMOTHER'S HOUSE	What does the sign shown near the Nanalnagar crossroad indicate? Answer the question based on the map given below.		A										
						<table border="1" style="width: 100%; text-align: center;"> <thead> <tr> <th colspan="4">Answer Options</th> </tr> <tr> <th>Option A</th> <th>Option B</th> <th>Option C</th> <th>Option D</th> </tr> </thead> <tbody> <tr> <td>No parking</td> <td>No entry</td> <td>Pedestrians prohibited</td> <td>Cycles prohibited</td> </tr> </tbody> </table>				Answer Options				Option A	Option B
Answer Options															
Option A	Option B	Option C	Option D												
No parking	No entry	Pedestrians prohibited	Cycles prohibited												
8	3_17 Science 1594	CH-8 REACHING GRANDMOTHER'S HOUSE	Arrange the following from the shortest length of time to the longest:	<table border="1" style="width: 100%; text-align: center;"> <tr> <td>a month</td> <td>a school period</td> <td>the winter season</td> <td>a year</td> <td>a week</td> <td>a minute</td> </tr> </table>	a month	a school period	the winter season	a year	a week	a minute	C				
					a month	a school period	the winter season	a year	a week	a minute					
<table border="1" style="width: 100%; text-align: center;"> <thead> <tr> <th colspan="4">Answer Options</th> </tr> <tr> <th>Option A</th> <th>Option B</th> <th>Option C</th> <th>Option D</th> </tr> </thead> <tbody> <tr> <td>a month, a minute, a school period, the winter season, a week, a year</td> <td>a week, a school period, a minute, a month, a year, the winter season</td> <td>a minute, a school period, a week, a month, the winter season, a year</td> <td>a minute, a week, a school period, the winter season, a month, a year</td> </tr> </tbody> </table>				Answer Options				Option A	Option B	Option C	Option D	a month, a minute, a school period, the winter season, a week, a year	a week, a school period, a minute, a month, a year, the winter season	a minute, a school period, a week, a month, the winter season, a year	a minute, a week, a school period, the winter season, a month, a year
Answer Options															
Option A	Option B	Option C	Option D												
a month, a minute, a school period, the winter season, a week, a year	a week, a school period, a minute, a month, a year, the winter season	a minute, a school period, a week, a month, the winter season, a year	a minute, a week, a school period, the winter season, a month, a year												

S. N	Folder Number & Question Code	Topic	Question with Answer Options	Image (If Any)	Correct Answer (Option-A, B, C, D)
9	4_23 Science 8936	CH-8 REACHING GRANDMOTHER'S HOUSE	Which of the following transport would be used to carry wheat from Punjab to Andhra Pradesh?	NIL	A
Answer Options					
Option A		Option B		Option C	Option D
 A. Train		 B. Bullock Cart		 C. Aeroplane	 D. Ship
10	4_25 Science 10669	CH-8 REACHING GRANDMOTHER'S HOUSE	In the options given below one of the items has been matched wrongly.. Identify this item.		D
Answer Options					
Option A		Option B		Option C	Option D
Coolie- to carry luggage		Ticket checker- to check ticket.		Railway police force- to maintain law and order.	Vendors- to look after water supply

S. N	Folder Number & Question Code	Topic	Question with Answer Options	Image (If Any)	Correct Answer (Option-A, B, C, D)
11	4_25 Science 10683	CH-8 REACHING GRAND MOTHER'S HOUSE	How much would I have to walk to reach the restaurant from the Tiger's Enclosure?		C
Answer Options					
Option A		Option B		Option C	
about 200 metres		about 400 metres		about 1000 metres	
12	4_23 Science 8923	REACHING GRANDMOTHER'S HOUSE	Which of the following DEFINITELY needs electricity to work?	NIL	A
Answer Options					
Option A		Option B		Option C	
Option A		Option B		Option C	

S. N	Folder Number & Question Code	Topic	Question with Answer Options	Image (If Any)	Correct Answer (Option-A, B, C, D)				
13	4_24 Science 10154	CH-8 REACHING GRANDMOTHER'S HOUSE	You started your journey from Delhi to Kerala(by train) at 13. 00 hours on Wednesday and reached your destination at 23.00 hours on Friday. How long was your journey.	NIL	B				
						Answer Options			
						Option A	Option B	Option C	Option D
	46 hours	58 hours	57 hours	60 hours.					
14	4_25 Science 11664	CH-8 REACHING GRANDMOTHER'S HOUSE	What is the missing number in the table below?	TIME IN HOURS	AM/PM	B			
				17.00 HOURS	5.00 PM				
				22.10 HOURS					
Answer Options									
	Option A	Option B	Option C	Option D					
	10.00 PM	10.10 PM	09.50 PM	11.15 PM					

S. N	Folder Number & Question Code	Topic	Question with Answer Options	Image (If Any)	Correct Answer (Option-A, B, C, D)		
15	1_3 Science 7238	CH-8 Reaching grandmother's house.	<p>Imagine you are an engineer and you are given a task to spread a railway track between two town.</p> <p>In between the two town there is a big mountain as result you are facing a difficulty in spreading a railway track. Choose your solution from the given options.</p>		C		
Answer Options							
Option A		Option B		Option C		Option D	
You will make a bridge over the mountain		You will cancel the idea of spreading the railway line.		You will make a tunnel .		You will make a foot over bridge.	