
























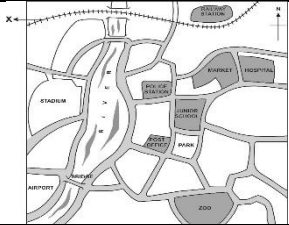


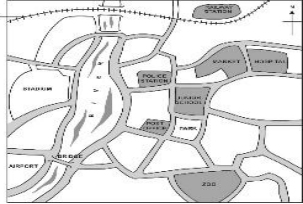

S.N	Folder Number & Question Code	Topic	Question with Answer Options	Image (If Any)	Correct Answer (Option-A, B, C, D)
1	1_3 Science 7220	CH-6 Omana's journey	The basic directions are North, South, East and West as shown below:Prabhu faces the rising sun and spreads his hands out. In which direction will his left hand point?		<b>B</b>
<b>Answer Options</b>					
Option A		Option B		Option C	
East		North		South	
				west	
2	2_9 Science 4868	CH-6 OMANA'S JOURNEY	If you are going for a long journey , why would you carry dry eatables.	NIL	<b>C</b>
<b>Answer Options</b>					
Option A		Option B		Option C	
Easy to carry		They are tasty.		They do not get spoiled easily.	
				Easily available.	

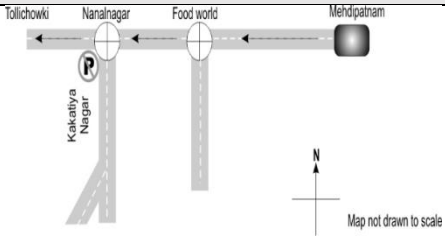

S. N	Folder Number & Question Code	Topic	Question with Answer Options	Image (If Any)		Correct Answer (Option- A, B, C, D)												
3	3_15 Science 3459	CH-6 OMANA'S JOURNEY	Postal Index Number (PIN) is a 6-digit code. Every town in India has a PIN code to identify it. Haldia has a PIN code of 721607. In which part of India is it?	<table border="1"> <thead> <tr> <th data-bbox="1318 431 1503 477">First Digit</th> <th data-bbox="1503 431 1688 477">Region</th> </tr> </thead> <tbody> <tr> <td data-bbox="1318 477 1503 522">1 or 2</td> <td data-bbox="1503 477 1688 522">Northern</td> </tr> <tr> <td data-bbox="1318 522 1503 568">3 or 4</td> <td data-bbox="1503 522 1688 568">Western</td> </tr> <tr> <td data-bbox="1318 568 1503 613">5 or 6</td> <td data-bbox="1503 568 1688 613">Southern</td> </tr> <tr> <td data-bbox="1318 613 1503 672">7 or 8</td> <td data-bbox="1503 613 1688 672">Eastern</td> </tr> </tbody> </table>		First Digit	Region	1 or 2	Northern	3 or 4	Western	5 or 6	Southern	7 or 8	Eastern	<b>C</b>		
First Digit	Region																	
1 or 2	Northern																	
3 or 4	Western																	
5 or 6	Southern																	
7 or 8	Eastern																	
<table border="1"> <thead> <tr> <th colspan="4" data-bbox="638 862 1906 902">Answer Options</th> </tr> <tr> <th data-bbox="638 902 953 943">Option A</th> <th data-bbox="953 902 1272 943">Option B</th> <th data-bbox="1272 902 1587 943">Option C</th> <th data-bbox="1587 902 1906 943">Option D</th> </tr> </thead> <tbody> <tr> <td data-bbox="638 943 953 1024">North</td> <td data-bbox="953 943 1272 1024">South</td> <td data-bbox="1272 943 1587 1024">East</td> <td data-bbox="1587 943 1906 1024">West</td> </tr> </tbody> </table>							Answer Options				Option A	Option B	Option C	Option D	North	South	East	West
Answer Options																		
Option A	Option B	Option C	Option D															
North	South	East	West															
4	3_16 Science 2294	CH-6 OMANA'S JOURNEY	In road traffic signals, the light at the top is usually _____ in colour.	NIL		A												
<table border="1"> <thead> <tr> <th colspan="4" data-bbox="638 1349 1906 1390">Answer Options</th> </tr> <tr> <th data-bbox="638 1390 953 1430">Option A</th> <th data-bbox="953 1390 1272 1430">Option B</th> <th data-bbox="1272 1390 1587 1430">Option C</th> <th data-bbox="1587 1390 1906 1430">Option D</th> </tr> </thead> <tbody> <tr> <td data-bbox="638 1430 953 1505">red</td> <td data-bbox="953 1430 1272 1505">green</td> <td data-bbox="1272 1430 1587 1505">amber</td> <td data-bbox="1587 1430 1906 1505">blue</td> </tr> </tbody> </table>							Answer Options				Option A	Option B	Option C	Option D	red	green	amber	blue
Answer Options																		
Option A	Option B	Option C	Option D															
red	green	amber	blue															

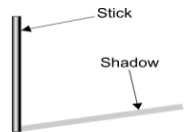







--	--	--

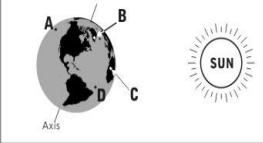
S. N	Folder Number & Question Code	Topic	Question with Answer Options	Image (If Any)	Correct Answer (Option- A, B, C, D)												
5	3_16 Science 2297	CH-6 OMANA'S JOURNEY	Which of these clocks is showing 7:30?		<b>A</b>												
<table border="1" style="width: 100%; text-align: center;"> <thead> <tr> <th colspan="4">Answer Options</th> </tr> <tr> <th>Option A</th> <th>Option B</th> <th>Option C</th> <th>Option D</th> </tr> </thead> <tbody> <tr> <td data-bbox="632 613 947 932">  <p><b>A.</b></p> </td> <td data-bbox="947 613 1272 932">  <p><b>B.</b></p> </td> <td data-bbox="1272 613 1598 932">  <p><b>C.</b></p> </td> <td data-bbox="1598 613 1923 932">  <p><b>D.</b></p> </td> </tr> </tbody> </table>						Answer Options				Option A	Option B	Option C	Option D	 <p><b>A.</b></p>	 <p><b>B.</b></p>	 <p><b>C.</b></p>	 <p><b>D.</b></p>
Answer Options																	
Option A	Option B	Option C	Option D														
 <p><b>A.</b></p>	 <p><b>B.</b></p>	 <p><b>C.</b></p>	 <p><b>D.</b></p>														
6	3_16 Science 2302	CH-6 OMANA'S JOURNEY	What does this traffic sign mean?		<b>C</b>												
<table border="1" style="width: 100%; text-align: center;"> <thead> <tr> <th colspan="4">Answer Options</th> </tr> <tr> <th>Option A</th> <th>Option B</th> <th>Option C</th> <th>Option D</th> </tr> </thead> <tbody> <tr> <td data-bbox="632 1328 947 1442">There is a school ahead.</td> <td data-bbox="947 1328 1272 1442">There is a speed breaker ahead.</td> <td data-bbox="1272 1328 1598 1442">There are men at work ahead.</td> <td data-bbox="1598 1328 1923 1442">There is some mud ahead.</td> </tr> </tbody> </table>						Answer Options				Option A	Option B	Option C	Option D	There is a school ahead.	There is a speed breaker ahead.	There are men at work ahead.	There is some mud ahead.
Answer Options																	
Option A	Option B	Option C	Option D														
There is a school ahead.	There is a speed breaker ahead.	There are men at work ahead.	There is some mud ahead.														

S. N	Folder Number & Question Code	Topic	Question with Answer Options	Image (If Any)	Correct Answer (Option- A, B, C, D)												
7	3_16 Science 2309	CH-6 OMANA'S JOURNEY	Which of these vehicles would cause the LEAST pollution?		<b>B</b>												
<table border="1" style="width: 100%; text-align: center;"> <thead> <tr> <th colspan="4" data-bbox="457 521 1997 558">Answer Options</th> </tr> <tr> <th data-bbox="457 558 827 602">Option A</th> <th data-bbox="827 558 1173 602">Option B</th> <th data-bbox="1173 558 1585 602">Option C</th> <th data-bbox="1585 558 1997 602">Option D</th> </tr> </thead> <tbody> <tr> <td data-bbox="457 602 827 940">  <b>A</b> </td> <td data-bbox="827 602 1173 940">  <b>B</b> </td> <td data-bbox="1173 602 1585 940">  <b>C</b> </td> <td data-bbox="1585 602 1997 940">  <b>D</b> </td> </tr> </tbody> </table>						Answer Options				Option A	Option B	Option C	Option D	 <b>A</b>	 <b>B</b>	 <b>C</b>	 <b>D</b>
Answer Options																	
Option A	Option B	Option C	Option D														
 <b>A</b>	 <b>B</b>	 <b>C</b>	 <b>D</b>														
8	3_17 Science 1600	CH-6 OMANA'S JOURNEY	The park is to the _____ of the Junior School.		<b>B</b>												
<table border="1" style="width: 100%; text-align: center;"> <thead> <tr> <th colspan="4" data-bbox="457 1284 1724 1321">Answer Options</th> </tr> <tr> <th data-bbox="457 1321 774 1365">Option A</th> <th data-bbox="774 1321 1092 1365">Option B</th> <th data-bbox="1092 1321 1409 1365">Option C</th> <th data-bbox="1409 1321 1724 1365">Option D</th> </tr> </thead> <tbody> <tr> <td data-bbox="457 1365 774 1446">North</td> <td data-bbox="774 1365 1092 1446">South</td> <td data-bbox="1092 1365 1409 1446">East</td> <td data-bbox="1409 1365 1724 1446">West</td> </tr> </tbody> </table>						Answer Options				Option A	Option B	Option C	Option D	North	South	East	West
Answer Options																	
Option A	Option B	Option C	Option D														
North	South	East	West														

S. N	Folder Number & Question Code	Topic	Question with Answer Options	Image (If Any)	Correct Answer (Option- A, B, C, D)												
9	3_17 Science 1601	CH-6 OMANA'S JOURNEY	What could 'X' represent on the map?		A												
<table border="1" style="width: 100%; text-align: center;"> <thead> <tr> <th colspan="4">Answer Options</th> </tr> <tr> <th>Option A</th> <th>Option B</th> <th>Option C</th> <th>Option D</th> </tr> </thead> <tbody> <tr> <td>Railway tracks.</td> <td>Pedestrian crossing.</td> <td>Bridge.</td> <td>River.</td> </tr> </tbody> </table>						Answer Options				Option A	Option B	Option C	Option D	Railway tracks.	Pedestrian crossing.	Bridge.	River.
Answer Options																	
Option A	Option B	Option C	Option D														
Railway tracks.	Pedestrian crossing.	Bridge.	River.														
10	3_17 Science 1624	CH-6 OMANA'S JOURNEY	Aditi was making a list of methods of communication and Saroj was making a list of things made from paper. Which of the following could be present in both the lists?		B												
<table border="1" style="width: 100%; text-align: center;"> <thead> <tr> <th colspan="4">Answer Options</th> </tr> <tr> <th>Option A</th> <th>Option B</th> <th>Option C</th> <th>Option D</th> </tr> </thead> <tbody> <tr> <td>A stamp</td> <td>An inland letter</td> <td>A mobile phone</td> <td>A cardboard box</td> </tr> </tbody> </table>						Answer Options				Option A	Option B	Option C	Option D	A stamp	An inland letter	A mobile phone	A cardboard box
Answer Options																	
Option A	Option B	Option C	Option D														
A stamp	An inland letter	A mobile phone	A cardboard box														

S. N	Folder Number & Question Code	Topic	Question with Answer Options	Image (If Any)	Correct Answer (Option-A, B, C, D)										
11	4_23 Science 8926	CH-6 OMANA'S JOURNEY	If you were going from Mehdiapatnam to Tollichowki, in which direction would you be travelling?		D										
						<table border="1" style="width: 100%; text-align: center;"> <thead> <tr> <th colspan="4">Answer Options</th> </tr> <tr> <th>Option A</th> <th>Option B</th> <th>Option C</th> <th>Option D</th> </tr> </thead> <tbody> <tr> <td>NORTH</td> <td>SOUTH</td> <td>EAST</td> <td>WEST</td> </tr> </tbody> </table>				Answer Options				Option A	Option B
Answer Options															
Option A	Option B	Option C	Option D												
NORTH	SOUTH	EAST	WEST												
12	4_23 Science 8943	OMANA'S JOURNEY	Which of the following vehicles is likely to have this symbol on it?		C										
						<table border="1" style="width: 100%; text-align: center;"> <thead> <tr> <th colspan="4">Answer Options</th> </tr> <tr> <th>Option A</th> <th>Option B</th> <th>Option C</th> <th>Option D</th> </tr> </thead> <tbody> <tr> <td>Milk tanker</td> <td>Water tanker</td> <td>Petrol tanker</td> <td>Lorry carrying bricks</td> </tr> </tbody> </table>				Answer Options				Option A	Option B
Answer Options															
Option A	Option B	Option C	Option D												
Milk tanker	Water tanker	Petrol tanker	Lorry carrying bricks												

S. N	Folder Number & Question Code	Topic	Question with Answer Options	Image (If Any)	Correct Answer (Option-A, B, C, D)										
13	4_23 Science 8945	CH-6 OMANA'S JOURNEY	Which of these could be the shadow of a stick at 12 noon?		C										
						<table border="1"> <thead> <tr> <th colspan="4">Answer Options</th> </tr> <tr> <th>Option A</th> <th>Option B</th> <th>Option C</th> <th>Option D</th> </tr> </thead> <tbody> <tr> <td>  </td> <td>  </td> <td>  </td> <td>  </td> </tr> </tbody> </table>				Answer Options				Option A	Option B
Answer Options															
Option A	Option B	Option C	Option D												
															
14	4_24 Science 10151	CH-6 OMANA'S JOURNEY	Sania wanted to send photographs to her friend in London. Which of the following can be used by her to send the photographs?	NIL	C										
						<table border="1"> <thead> <tr> <th colspan="4">Answer Options</th> </tr> <tr> <th>Option A</th> <th>Option B</th> <th>Option C</th> <th>Option D</th> </tr> </thead> <tbody> <tr> <td>Postcard</td> <td>Inland letter</td> <td>Envelope</td> <td>Telegram</td> </tr> </tbody> </table>				Answer Options				Option A	Option B
Answer Options															
Option A	Option B	Option C	Option D												
Postcard	Inland letter	Envelope	Telegram												

S. N	Folder Number & Question Code	Topic	Question with Answer Options	Image (If Any)	Correct Answer (Option-A, B, C, D)												
15	4_25 Science 10659	CH-6 OMANA'S JOURNEY	In the picture shown below, in which of the places (A, B, C or D) is it night?		A												
<table border="1" style="width: 100%; text-align: center;"> <thead> <tr> <th colspan="4">Answer Options</th> </tr> <tr> <th>Option A</th> <th>Option B</th> <th>Option C</th> <th>Option D</th> </tr> </thead> <tbody> <tr> <td>A</td> <td>B</td> <td>C</td> <td>D</td> </tr> </tbody> </table>						Answer Options				Option A	Option B	Option C	Option D	A	B	C	D
Answer Options																	
Option A	Option B	Option C	Option D														
A	B	C	D														