




Question Paper Set 5

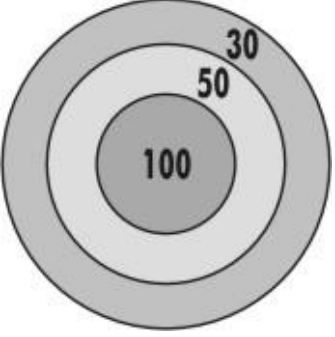
Subject: Mathematics

Grade: 5th





Q.N	Folder name & Question code	Topic	Question With Answer Options	Image (If Any)	Correct Answer (Option-A,B,C,D)
-----	-----------------------------	-------	------------------------------	----------------	---------------------------------

1	5_28 Mathematics 9935	Ch-1 The Fish Tale	Which of the projects given in the book takes up the greatest number of pages?		A	
		Answers Options				
		Option A	Option B	Option C		Option D
		Project-1	Project-2	Project-3		All take up the same number
2	5_28 Mathematics 9938	Ch-1 The Fish Tale	Mr. Suri bought 4 shirts from this shop. How much does he have to pay?		B	
		Answers Options				
		Option A	Option B	Option C		Option D
		Rs 430	Rs 880	Rs 890		Rs 900

3	5_26 Mathematics 1770	CH-1 The Fish Tale	How many glasses of juice can you get from this pack if each glass holds 300 ml?		B	
		Answers Options				
		Option A	Option B	Option C		Option D
		4	5	6		50


4	5_29 MATHEMATICS 11565	CH-1 The Fish Tale	Mahesh throws the dart TWICE at the board. Which of the following CAN be his total score from TWO THROWS? (Both throws hit the board.)		D	
		Answers Options				
		Option A	Option B	Option C		Option D
			20	30	50	100

5	3_19 MATHEMATICS 2622	CH-1 The Fish Tale	What number should come in the empty box to make the statement true?	$55 + 300 - 60 + 45 = \square + 240$	A	
		Answers Options				
		Option A	Option B	Option C		Option D


		100	240	300	400	
6	5_26 MATHEMATICS 1778	CH-1 THE FISH TALE	A shop sells 4 types of notebooks. Which of these notebooks should Preeti buy if she wants the maximum number of pages for each rupee spent?		A	
		Answers Options				
		Option A	Option B	Option C	Option D	
			 B.	 C.	 D.	






7	5_27 Mathematics 8297	Ch-1 THE FISH TALE	On Sunday, the 6 th of February, Sudhir tells his aunt, I went for a picnic with my classmates exactly 15 days ago." When was his picnic?"		A
		Answers Options			
		Option A	Option B	Option C	Option D
		Saturday, 22nd January	Sunday, 23 RD January	Monday, 21st February	Friday, 21st January

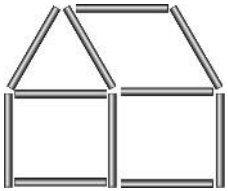
8	3_19	CH-1	See the numbers in the box.		B
	MATHEMATICS	The Fish tale	Which number is different from the other three?		
	2635	Answers Options			
		Option A	Option B	Option C	Option D
		3	2	1	5

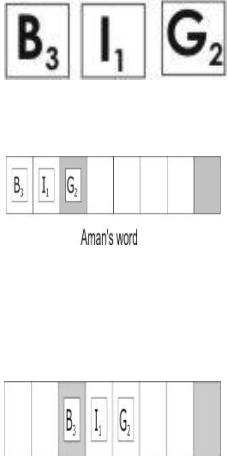
9	5_27	Ch-1			C
	Mathematics	THE FISH TALE	About how much money will you need to buy 12 mugs like the ones shown?		
	8281	Answers Options			
		Option A	Option B	Option C	Option D
		Rs. 300	Rs. 400	Rs. 500	Rs. 600

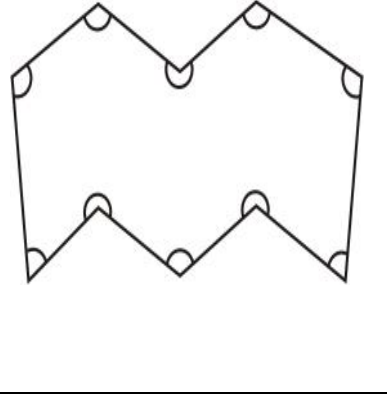
10	3_19	CH-1	Which of the following makes sense to round to the nearest 10 digit number?		C
	Mathematics	The fish tale			
	2614	Answers Options			
		Option A	Option B	Option C	Option D
	Your friend's telephone number	The PIN code of your city or town	The number of pages in your Maths book	The year of your birth	

11	3_19 Mathematics 2632	Ch-1 The Fish Tale	In which month and year was the oil packaged?		A
		Answers Options			
		Option A	Option B	Option C	Option D
		06-Mar	04-Apr	03 Jun	04-Jun

12	5_28 Mathematics 9914	Ch-2 SHAPES AND ANGLES	Which of the angles below is nearest in measure to the one formed by the boy's arms?		D
		Answers Options			
		Option A	Option B	Option C	Option D
					

13	5_26 Mathematics 1779	CH-2 SHAPES & ANGLES	<p>Sophia is arranging straws on the floor to form houses like the one shown below.</p> <p>After using up a packet of 50 straws to form as many houses like these as possible, she finds that the last house is incomplete.</p> <p>How many MORE straws would she need to complete the house that is incomplete?</p>		A		
Answers Options							
Option A		Option B		Option C		Option D	
5		6		11		23	

14	5_26 Mathematics 1782	CH-2 SHAPES & ANGLES	<p>Aman and Aliya are playing a game in which they have to form words by placing letters on a board that has white and shaded squares. Read how points are scored in this game to answer the question.</p> <p>Each letter carries some points, and if a letter is placed on a shaded square, the points on it are doubled.</p> <p>Aman has to place the word on this line.</p> <p>He forms the word on this line as shown below and scores $3 + 1 +$ twice of 2, that is, 8 points. What would have been his score if he had placed the word as shown below?</p>		B		
Answers Options							
Option A		Option B		Option C		Option D	
12		9		8		6	

15	3_19 MATHEMATICS 2650	CH-2 Shapes & Angles	Angles between 90° and 180° are called obtuse angles. Angles between 180° and 360° are called reflex angles. How many angles in this polygon are obtuse?			A	
		Answers Options					
		Option A	Option B	Option C			Option D
		5	7	8			10