



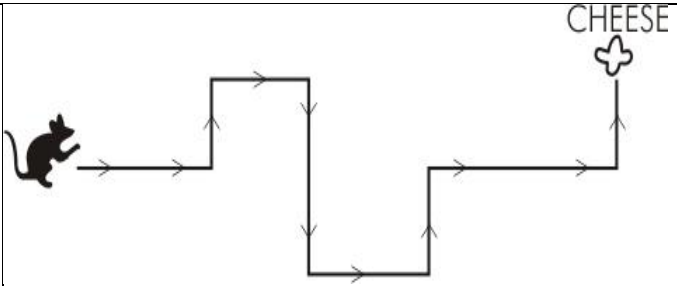
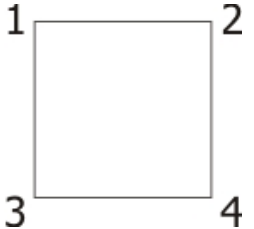
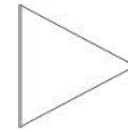
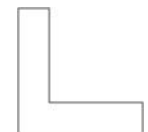








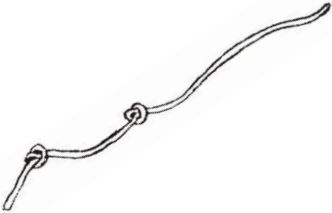

QUESTION PAPER

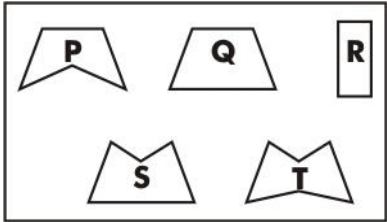
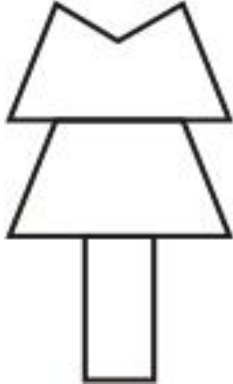
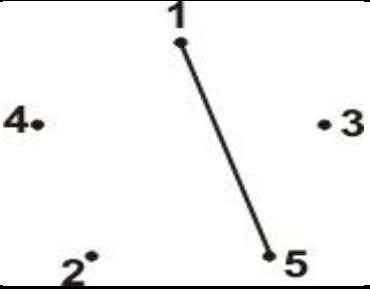
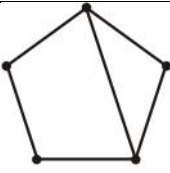
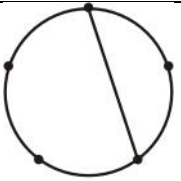


Subject:
Mathematics
Grade: III


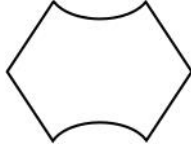
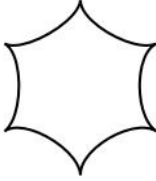

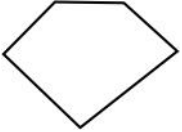

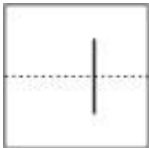


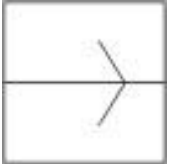
Set 5

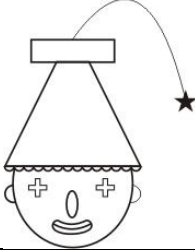

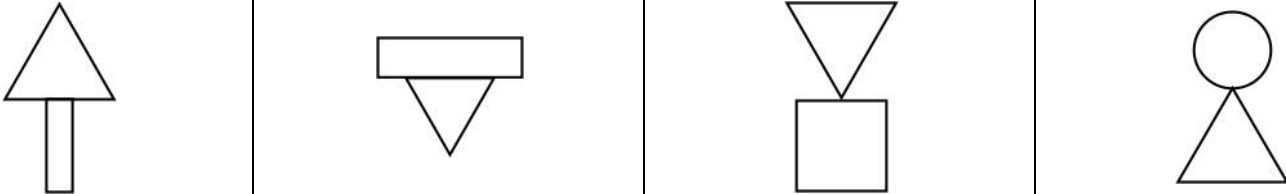

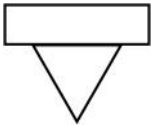
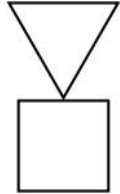

S.N	Folder Number & Question Code	Topic	Question with Answer Options	Image (If Any)	Correct Answer (Option-A,B,C,D)
1.	2_11 Mathematics 4251	Shapes And Designs	Four objects are shown here: Which two of them are like each other in SHAPE?	<div style="display: flex; justify-content: space-around; align-items: center;"> <div style="text-align: center;"> Carrot</div> <div style="text-align: center;"> Book</div> <div style="text-align: center;"> Glass</div> <div style="text-align: center;"> Party Cap</div> </div>	C
Answer Options					
Option A		Option B		Option C	
The CARROT and the BOOK		The GLASS and the PARTY CAP		The CARROT and the PARTY CAP	
Option D					
The BOOK and the PARTY CAP					
2.	2_11 Mathematics 4252	Shapes And Designs	A mouse started from its hole and went along the path shown to the cheese. On the way, how many RIGHT turns did it make?		B
Answer Options					
Option A		Option B		Option C	
0		3		4	
Option D					
7					

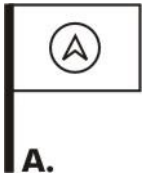
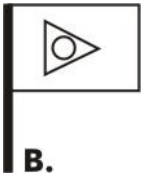

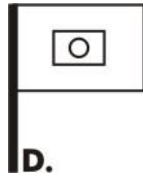
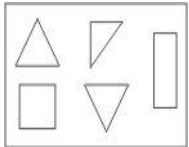
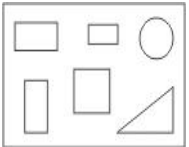
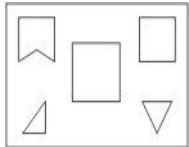
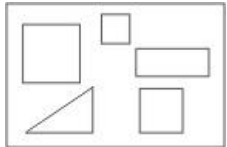
S.N	Folder Number & Question Code	Topic	Question with Answer Options	Image (If Any)	Correct Answer (Option-A,B,C,D)				
3.	3_18 Mathematics 3162	Shapes And Designs	<p>This shape has 4 corners.</p>  <p>Which shape below has exactly 3 corners?</p>		A				
						Answer Options			
						Option A	Option B	Option C	Option D
									
4.	5_28 Mathematics 9846	Shapes And Designs	<p>How many CIRCLES are there in the box below?</p>		B				
						Answer Options			
						Option A	Option B	Option C	Option D
						one	two	three	Four

S.N	Folder Number & Question Code	Topic	Question with Answer Options	Image (If Any)	Correct Answer (Option-A,B,C,D)				
5.	5_28 Mathematics 9857	Shapes And Designs	Which of the following is in the shape of a rectangle?		B				
						Answer Options			
						Option A	Option B	Option C	Option D
						a pencil	a postcard	a samosa	a cricket ball
6.	5_27 Mathematics 8214	Shapes And Designs	A piece of wool with 2 knots on it is shown below: Which of the following also shows the piece of wool shown above?		C				
						Answer Options			
						Option A	Option B	Option C	Option D
									

S.N	Folder Number & Question Code	Topic	Question with Answer Options	Image (If Any)	Correct Answer (Option-A,B,C,D)			
7.	2-11 Mathematics 4245	Shapes And Designs	<p>Look carefully at the shapes in this box.</p>  <p>Which three shapes from the box were used to make the tree shown below?</p>		C			
			Answer Options					
			Option A			Option B	Option C	Option D
			P, Q and R			P, S and R	Q, S and R	Q, T and R
8.	2-11 Mathematics 4246	Shapes And Designs	<p>See the numbered dots below. If I join the dots in order from small to big, which figure will I get?</p>		D			
			Answer Options					
			Option A			Option B	Option C	Option D
			 A.			 B.	 C.	 D.

S.N	Folder Number & Question Code	Topic	Question with Answer Options	Image (If Any)	Correct Answer (Option-A,B,C,D)				
9.	5_27 Mathematics 8206	Shapes And Designs	This figure has 3 straight sides. Which of the following figures has 6 straight sides?		C				
						Answer Options			
						Option A	Option B	Option C	Option D
				   					
10.	3_18 Mathematics 3175	Shapes And Designs	A cut is made on a folded sheet of paper as shown. How will the cut look like when the paper is opened again?	 <p>Paper BEFORE folding Paper AFTER folding Cut is made on FOLDED PAPER</p>	A				
						Answer Options			
						Option A	Option B	Option C	Option D
				   					

S.N	Folder Number & Question Code	Topic	Question with Answer Options	Image (If Any)	Correct Answer (Option-A,B,C,D)				
11.	2_11 Mathematics 4238	Shapes And Designs	Which COMPLETE shape can you see in this picture?		C				
						Answer Options			
						Option A	Option B	Option C	Option D
						Circle	Triangle	Rectangle	Square
12.	5_26 Mathematics 1440	Shapes And Designs	The letters below are made up of exactly 3 straight lines each. In which of the following names is EACH letter made of exactly 3 straight lines?		B				
						Answer Options			
						Option A	Option B	Option C	Option D
						HIREN	ANYA	JIM	SHEENA
13.	5_27 Mathematics 8197	Shapes And Designs	Which of the following figures shows a triangle under a rectangle?		B				
						Answer Options			
						Option A	Option B	Option C	Option D
									

S.N	Folder Number & Question Code	Topic	Question with Answer Options	Image (If Any)	Correct Answer (Option-A,B,C,D)				
14.	5_26 Mathematics 1424	Shapes and Designs	In which of these flags can you see a triangle and a circle?		B				
						Answer Options			
						Option A	Option B	Option C	Option D
 A.	 B.	 C.	 D.						
15.	3_19 Mathematics 2540	Shapes and Designs	Which box contains three squares?		D				
						Answer Options			
						Option A	Option B	Option C	Option D
 A	 B	 C	 D						