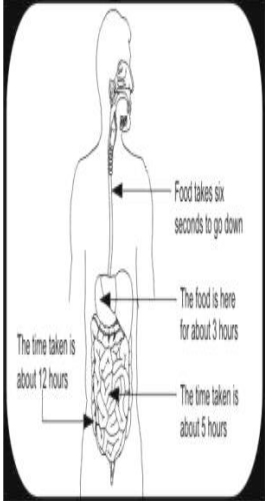


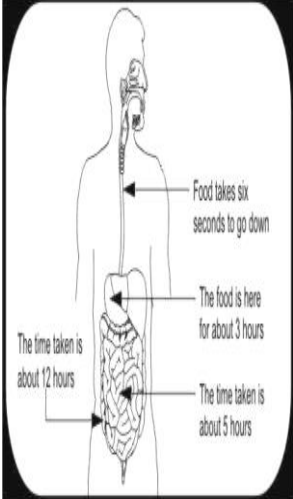
Set 4-EVS-ClassV

S.N	Folder Number & Question	Topic	Question with answer options	Image(if any)	Correct Answer (Option-A,B,C,D)
1	3_17 Science 1935	From Tasting to Digesting	In the human body, which of the following removes waste from the blood?		D
Answer Options					
Option A		Option B	Option C	Option D	
Large intestines	Heart	Small intestines	Kidneys		

S.N	Folder Number & Question	Topic	Question with answer options	Image(if any)	Correct Answer (Option-A,B,C,D)	
2	<p style="text-align: center;">4_24 Science 10187</p>	From Tasting to Digesting	Which of the following is from an animal source and rich in fat and protein?		B	
Answer Options						
Option A		Option B	Option C	Option D		
Bread	Cheese	Curd	Nuts			




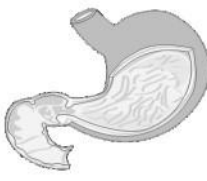
S.N	Folder Number & Question	Topic	Question with answer options	Image(if any)	Correct Answer (Option-A,B,C,D)
3	4_24 Science 10188	From Tasting to Digesting	Which of the following is LOW in proteins, carbohydrates as well as fat?		A
Answer Options					
Option A		Option B	Option C	Option D	
Cabbage	Potato	Carrot	Beetroot		

S.N	Folder Number & Question	Topic	Question with answer options	Image(if any)	Correct Answer (Option-A,B,C,D)												
4	<p>4_24 Science 10213</p>	From Tasting to Digesting	<p>The time food takes to travel through different parts of the body during digestion is shown in the figure below. Answer the question based on the figure.</p> <p>Identify the organ where the process of digestion takes 5 hours.</p>		B												
<table border="1" style="width: 100%; text-align: center;"> <thead> <tr> <th colspan="4">Answer Options</th> </tr> <tr> <th>Option A</th> <th>Option B</th> <th>Option C</th> <th>Option D</th> </tr> </thead> <tbody> <tr> <td>Large intestine</td> <td>Small intestine</td> <td>Kidney</td> <td>Stomach</td> </tr> </tbody> </table>						Answer Options				Option A	Option B	Option C	Option D	Large intestine	Small intestine	Kidney	Stomach
Answer Options																	
Option A	Option B	Option C	Option D														
Large intestine	Small intestine	Kidney	Stomach														



S.N	Folder Number & Question	Topic	Question with answer options	Image(if any)	Correct Answer (Option-A,B,C,D)											
5	<p style="text-align: center;">4_24 Science 10214</p>	From Tasting to Digesting	<p>The time food takes to travel through different parts of the body during digestion is shown in the figure below. Answer the question based on the figure.</p> <p>The total time taken for the above process to complete is about:</p>		C											
<table border="1" style="width: 100%; border-collapse: collapse;"> <thead> <tr> <th colspan="4" data-bbox="363 891 1469 931">Answer Options</th> </tr> <tr> <th data-bbox="363 936 576 976">Option A</th> <th data-bbox="579 936 799 976">Option B</th> <th data-bbox="802 936 1070 976">Option C</th> <th data-bbox="1074 936 1469 976">Option D</th> </tr> </thead> <tbody> <tr> <td data-bbox="363 981 576 1084">12 hours approx</td> <td data-bbox="579 981 799 1084">17 hours approx</td> <td data-bbox="802 981 1070 1084">20 hours approx</td> <td data-bbox="1074 981 1469 1084">26 hours approx</td> </tr> </tbody> </table>					Answer Options				Option A	Option B	Option C	Option D	12 hours approx	17 hours approx	20 hours approx	26 hours approx
Answer Options																
Option A	Option B	Option C	Option D													
12 hours approx	17 hours approx	20 hours approx	26 hours approx													

S.N	Folder Number & Question	Topic	Question with answer options	Image(if any)	Correct Answer (Option-A,B,C,D)	
6	4_25 Science 10706	From Tasting to Digesting	Suresh wants to participate in his school annual sports competition. Which of the meals A, B, C or D should he eat regularly during the training period to build up his muscles?		A	
Answer Options						
Option A		Option B	Option C	Option D		
A. Green salad Dal Butter roti Dahi Gulab jamun	B. French fries Burger Green salad Coke Ice cream	C. Tomato soup Garlic bread Cheese pizza Pepsi Ice cream	D. Vegetable soup Fried rice Raita Potato chips Ice cream			

S.N	Folder Number & Question	Topic	Question with answer options	Image(if any)	Correct Answer (Option-A,B,C,D)
7	4_23 Science 8957	From Tasting to Digesting	Which of these transports food, water, oxygen and minerals to every cell of the human body?		C
Answer Options					
Option A		Option B	Option C	Option D	
Muscles	Nerves	Blood	Skin		

S.N	Folder Number & Question	Topic	Question with answer options	Image(if any)	Correct Answer (Option-A,B,C,D)
8	4_23 Science 8968	From Tasting to Digesting	Which organ is made up of air-carrying tubes and tiny sacs?		C
Answer Options					
Option A		Option B	Option C	Option D	
					


S.N	Folder Number & Question	Topic	Question with answer options	Image(if any)	Correct Answer (Option-A,B,C,D)
9	4_24 Science 8980	From Tasting to Digesting	If a person eats more food than he uses, then		A
Answer Options					
Option A		Option B	Option C	Option D	
the extra food becomes stored fat	the rate of breathing increases	he loses weight all of a sudden	he is unable to walk properly		

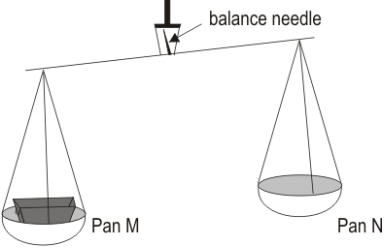
Q.N	Folder Name & Question Code	Topic	Question with Answer options	Image (if any)	Correct answer (Option-A,B,C,D)				
10	4_24 Science 10195	From tasting to digesting	<p>See the symbols 1 and 2 shown here: Symbol 1 appears on: a packet of potato chips, a bottle of fruit juice Symbol 2 appears on: a packet of frozen chicken, a box of cake Neither symbol appears on: a T-shirt Which of these best describes what symbol 1 probably stands for?</p>	 Symbol 1 (Green)  Symbol 2 (Red)	B				
						Answer Options			
						Option A	Option B	Option C	Option D
						item got from nature	vegetarian food	milk product	contains Vitamin C

Q.N	Folder Name & Question Code	Topic	Question with Answer options	Image (if any)	Correct answer (Option-A,B,C,D)
11	2_10 Science 4064	From tasting to digesting	Where does our body get the water it needs?		D
Answer Options					
		Option A	Option B	Option C	Option D
		From the water that we drink.	From other liquids that we drink	From the food that we eat.	From all the above.

Q.N	Folder Name & Question Code	Topic	Question with Answer options	Image (if any)	Correct answer (Option-A,B,C,D)
12	2_10 Science 4069	From tasting to digesting	Which of these is caused by drinking unclean water?		B
Answer Options					
		Option A	Option B	Option C	Option D
		Malaria	Typhoid	Chicken pox	Measles

S.N	Folder Number & Question	Topic	Question with answer	Options	Image (if any)	Correct answer (Option A,B,C,D)												
13	3_15 SCIENCE 3473	Mangoes round the year	In Rahul's lunch bag, which of these items would get spoilt most quickly?			B												
<table border="1"> <tr> <td colspan="4"></td> </tr> <tr> <td>Option A</td> <td>Option B</td> <td>Option C</td> <td>Option D</td> </tr> <tr> <td>Frooty" cold drink"</td> <td>Apple pieces</td> <td>Rice</td> <td>Curry</td> </tr> </table>											Option A	Option B	Option C	Option D	Frooty" cold drink"	Apple pieces	Rice	Curry
Option A	Option B	Option C	Option D															
Frooty" cold drink"	Apple pieces	Rice	Curry															

S.N	Folder Number & Question	Topic	Question with answer Options	Image (if any)	Correct answer (Option A,B,C,D)
14	3_16 SCIENCE 2352	Mangoes round the year	Study this information on a packet of Garam Masala. Till which date can it be safely consumed?	 <p>The image shows a packet of Garam Masala. A circular callout highlights the 'Best Before' date information: 'BEST BEFORE WITHIN 12 MONTHS FROM THE DATE OF PACKAGING'. Below this, it lists 'Lot No.', 'Mfg. Dt. 15/04/04', and 'MRP Rs. 10.00'.</p>	C
Option A		Option B	Option C	Option D	
6th April, 2004		6th April, 2005	30th June, 2005	30th April, 2006	

S.N	Folder Number & Question	Topic	Question with answer Options	Image (if any)	Correct answer (Option A,B,C,D)								
15	3_16 SCIENCE 2357	Mangoes round the year	Kajol and her mother go to buy vegetables. The shopkeeper places an empty basket in one of the pans of the balance, which goes down as shown in the figure. What should the shopkeeper do now before placing the weights and vegetables in the pans?		A								
<table border="1"> <thead> <tr> <th>Option A</th> <th>Option B</th> <th>Option C</th> <th>Option D</th> </tr> </thead> <tbody> <tr> <td>Add weights to pan N to bring the needle to the middle.</td> <td>Add weights to pan M to bring the needle to the middle.</td> <td>Add equal weights to both pans to adjust the needle.</td> <td>Not do anything as the measurement will be okay as it is.</td> </tr> </tbody> </table>						Option A	Option B	Option C	Option D	Add weights to pan N to bring the needle to the middle.	Add weights to pan M to bring the needle to the middle.	Add equal weights to both pans to adjust the needle.	Not do anything as the measurement will be okay as it is.
Option A	Option B	Option C	Option D										
Add weights to pan N to bring the needle to the middle.	Add weights to pan M to bring the needle to the middle.	Add equal weights to both pans to adjust the needle.	Not do anything as the measurement will be okay as it is.										