


QUESTION PAPER

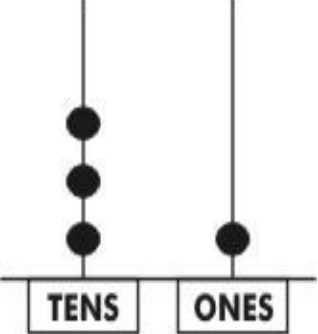
Subject:
Mathematics
Grade: III






Set 4





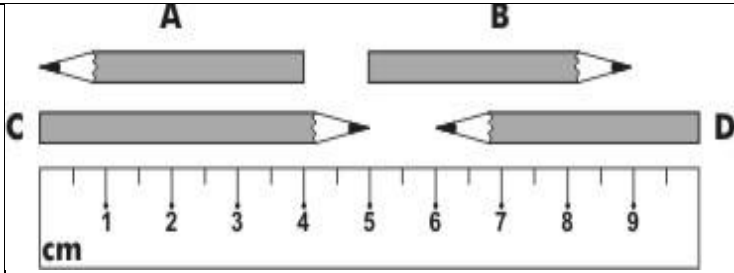
S.N	Folder Number & Question Code	Topic	Question with Answer Options	Image (If Any)	Correct Answer (Option-A,B,C,D)	
1	2-11 Mathematics 4243	Give and Take	4 TENS =		C	
		Answer Options				
		Option A	Option B	Option C	Option D	
		4	14	40	41	
2	5_27 Mathematics 8195	Give and Take	Which number comes just BEFORE 5 tens?	-	A	
		Answer Options				
		Option A	Option B	Option C	Option D	
		49	40	14	4	


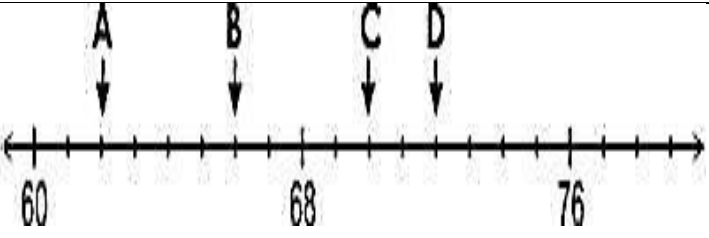
S.N	Folder Number & Question Code	Topic	Question with Answer Options	Image (If Any)	Correct Answer (Option-A,B,C,D)				
3	5_27 Mathematics 8198	Give and take	In which pair of numbers below is the second number 20 LESS than the first number?		D				
						Answer Options			
						Option A	Option B	Option C	Option D
						62, 60	66, 44	55, 25	83, 63
4.	5_28 Mathematics 9855	GIVE AND TAKE	A subtraction story is shown in the given pictures. Which number sentence matches this story?		D				
						Answer Options			
						Option A	Option B	Option C	Option D
						$5 - 2 = 3$	$7 - 3 = 4$	$2 + 5 = 7$	$7 - 2 = 5$


6S. N	Folder Number & Question Code	Topic	Question with Answer Options	Image (If Any)	Correct Answer (Option-A,B,C,D)				
5.	3_19 Mathematics 2544	Give and take	Which number is 18 more than 62 ?		A				
						Answer Options			
						Option A	Option B	Option C	Option D
						80	70	56	44
6.	3_19 Mathematics 2549	Give and take	Which number will come in the empty box?	$70 - 39 = \square - 59$	D				
						Answer Options			
						Option A	Option B	Option C	Option D
						20	50	70	90

S.N	Folder Number & Question Code	Topic	Question with Answer Options	Image (If Any)	Correct Answer (Option - A,B,C,D)				
7.	5_29 Mathematics 11471	Give and Take	This abacus shows the number 31. Rita takes away one ball from the TENS place. Which number will the abacus show then?		C				
						Answer Options			
						Option A	Option B	Option C	Option D
						32	30	21	20
8.	5_29 Mathematics 11477	Give and take	5 tens - 2 is equal to		D				
						Answer Options			
						Option A	Option B	Option C	Option D
						3	13	30	48

S.N	Folder Number & Question Code	Topic	Question with Answer Options	Image (If Any)	Correct Answer (Option-A,B,C,D)				
9.	2_11 Mathematics 4230	Long and Short	Which stick is the LONGEST?		C				
						Answer Options			
						Option A	Option B	Option C	Option D
						A. 	B' 	C. 	D' 
10.	5_28 Mathematics 9848	Long and Short	Here is a measuring tape. Which of the following can you measure with it?		D				
						Answer Options			
						Option A	Option B	Option C	Option D
						The weight of your school bag	The number of pencils in your box	The time at which you leave for school	The length of your foot

S.N	Folder Number & Question Code	Topic	Question with Answer Options	Image (If Any)	Correct Answer (Option-A,B,C,D)
11.	3_18 Mathematics 3161	Long and Short	Which balloon has the longest string?		C
		Option A	Option B	Option C	Option D
					
12.	3_19 Mathematics 2545	Long and short	Look at the pencils kept next to the ruler. Which pencil is the longest?		C
		Option A	Option B	Option C	Option D
		A	B	C	D

S.N	Folder Number & Question Code	Topic	Question with Answer Options	Image (If Any)	Correct Answer (Option-A,B,C,D)				
13.	5_27 Mathematics 8219	Long and Short	Mita has kept her doll next to a tower of blocks. If each block is 10 cm high, about how tall is Mita's doll?		A				
						Answer Options			
						Option A	Option B	Option C	Option D
						35 cm	25 cm	20 cm	10 cm
14.	5_28 Mathematics 9851	Long and Short	Which point represents 72 on the number line below?		D				
						Answer Options			
						Option A	Option B	Option C	Option D
						A	B	C	D

S.N	Folder Number & Question Code	Topic	Question with Answer Options	Image (If Any)	Correct Answer (Option-A,B,C,D)		
15.	5_29 Mathematics 11461	Long and Short	How many STRAIGHT lines are there INSIDE this box?		B		
Answer Options							
Option A		Option B		Option C		Option D	
2		3		4		5	