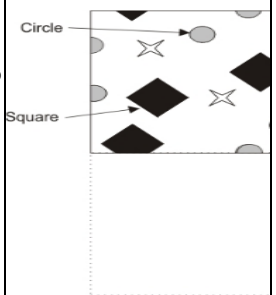
















SET - 3 CLASS IV SCIENCE



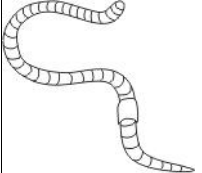

S.N	Folder Number & Question Code	Topic	Question with Answer Options	Image (If Any)	Correct Answer (Option - A,B,C,D)						
1	3_16 Science 2299	EAR TO EAR CH-2	What is the missing number in the table below?		B						
			<table border="1"> <thead> <tr> <th>Type of Teeth in Humans</th> <th>Number of Teeth in Humans</th> </tr> </thead> <tbody> <tr> <td>Milk Teeth</td> <td>20</td> </tr> <tr> <td>Permanent Teeth</td> <td>?</td> </tr> </tbody> </table>	Type of Teeth in Humans		Number of Teeth in Humans	Milk Teeth	20	Permanent Teeth	?	
			Type of Teeth in Humans	Number of Teeth in Humans							
			Milk Teeth	20							
Permanent Teeth	?										
Answer Options											
Option A	Option B	Option C	Option D								
30	32	28	34								
2	3_16 Science 2323	EAR TO EAR CH-2	The picture given aforesaid is a tile that is used to cover walls. If 4 such tiles are joined together to form a square (without turning any tile), how many full squares and circles will be seen?		A						
			Answer Options								
			Option A	Option B		Option C	Option D				
			10 squares and 14 circles	8 squares and 8 circles		10 squares and 12 circles	12 squares and 20 circles				

S.N	Folder Number & Question Code	Topic	Question with Answer Options	Image (If Any)	Correct Answer (Option-A,B,C,D)				
3	3_16 SCIENCE 2304	EAR TO EAR CH-2	Arrange the following animals in the order of the number of legs they have - starting from the MOST to LEAST number of legs.	NIL	B				
						Option A	Option B	Option C	Option D
						Millipede - Earthworm - Spider - Grasshopper	Millipede - Spider - Grasshopper - Earthworm	Spider - Grasshopper - Millipede - Earthworm	Spider - Millipede – Earthworm - Grasshopper
4	2_9 Science 5925	Ear to ear CH-2	Deepak loves to visit the zoo. Which of these animals will Deepak NOT find in the zoo?		D				
						Option A	Option B	Option C	Option D
									

S.N	Folder Number & Question Code	Topic	Question with Answer Options	Image (If Any)	Correct Answer (Option-A,B,C,D)				
5	2-10 Science 4304	Ear to ear CH-2	All young birds develop inside eggshells. What purpose does the eggshell serve for the developing bird?		A				
						Answer Options			
						Option A	Option B	Option C	Option D
						It provides protection to the developing bird.	It provides protein to develop the bird's muscles.	It provides food for the developing bird.	It does not serve any purpose at all.
6	2_9 Science 5958	A DAY WITH NANDU CH-3	I live in jungle. I love eating. I can eat everything that is found in forest like plants, fruits etc. I also eat other animals. Who I am guess.		B				
						Answer Options			
						Option A	Option B	Option C	Option D
						Rabbit	Bear	Tiger	Crocodile

S.N	Folder Number & Question Code	Topic	Question with Answer Options	Image (If Any)	Correct Answer (Option-A,B,C,D)		
7	2_10 Science 4046	A DAY WITH NANDU CH-3	Which of the feet given below belongs to a creature that hops?.		B		
						Option A	Option B
							
8	1_3 Science 6537	A DAY WITH NANDU CH-3	This is called a FOOD CHAIN because a deer eats grass, and a tiger eats a deer. Which of the following is a food chain?.		B		
						Option A	Option B
							

S.N	Folder Number & Question Code	Topic	Question with Answer Options	Image (If Any)	Correct Answer (Option-A,B,C,D)				
9	1_3 Science 6546	A DAY WITH NANDU CH-3	A baby chicken grows inside an egg for 21 days before it hatches. From where does the baby chick get its food before it hatches?		C				
						Option A	Option B	Option C	Option D
						It is fed by the mother hen.	It doesn't need any food.	It uses food stored in the egg.	It eats the egg shell.
10	2_9 Science 4867	A DAY WITH NANDU CH-3	Identify the one that does not belong to the group.		D				
						Option A	Option B	Option C	Option D
						DUCK	LILY	LOTUS	RABBIT

S.N	Folder Number & Question Code	Topic	Question with Answer Options	Image (If Any)	Correct Answer (Option-A,B,C,D)			
11	1_3 Science 6536	A DAY WITH NANDU CH-3	Some animals give birth to young ones. Some others lay eggs and hatch their young ones. Among these animals, which one gives birth to live young?		A			
				Option A		Option B	Option C	Option D
				 A. Horse		 B. Snake	 C. Earthworm	 D. Crab
12	1_3 Science 7211	A DAY WITH NANDU CH-3	Which of the following lists has only plant eating animals?		C			
				Option A		Option B	Option C	Option D
				Cow, elephant, lion, rabbit		Deer, cheetah, lion, butterfly.	Elephant, cow, rabbit, goat	Rabbit, vulture, tiger, deer.

S.N	Folder Number & Question Code	Topic	Question with Answer Options	Image (If Any)	Correct Answer (Option-A,B,C,D)										
13	1_3 Science 7221	A DAY WITH NANDU CH-3	Dogs, cats, cows and elephants are alike in many ways. One is that they are all_____.		B										
						Option A	Option B	Option C	Option D						
						four legged insects	four legged animals	animals that live in water	animals that can fly						
14	2_9 Science 5943	A DAY WITH NANDU CH-3	Observe the following groups of animals/birds. On what basis are these divided into two groups?	<table border="1"> <thead> <tr> <th>GROUP 1</th> <th>GROUP 2</th> </tr> </thead> <tbody> <tr> <td>Horse</td> <td>Lion</td> </tr> <tr> <td>Rabbit</td> <td>Eagle</td> </tr> <tr> <td>Squirrel</td> <td>Hawk</td> </tr> <tr> <td>Elephant</td> <td>Tiger</td> </tr> </tbody> </table>	GROUP 1	GROUP 2	Horse	Lion	Rabbit	Eagle	Squirrel	Hawk	Elephant	Tiger	B
				GROUP 1	GROUP 2										
				Horse	Lion										
Rabbit	Eagle														
Squirrel	Hawk														
Elephant	Tiger														
Option A	Option B	Option C	Option D												
Group 1 - Four footed Group 2 - Two footed	Group 1 - Plant eating Group 2 - Flesh eating	Group 1 - Furry tailed Group 2 - Non-furry tailed	Group 1 - Live on land -- Group 2 - Live in water												

S.N	Folder Number & Question Code	Topic	Question with Answer Options	Image (If Any)	Correct Answer (Option-A,B,C,D)
15	2_9 Science 5942	A DAY WITH NANDU CH-3	Some animals have bones while others do not. Which of these do <u>NOT</u> have bones?		B
Answer Options					
		Option A	Option B	Option C	Option D
		FISH	COCKROACH	CAT	BIRD