

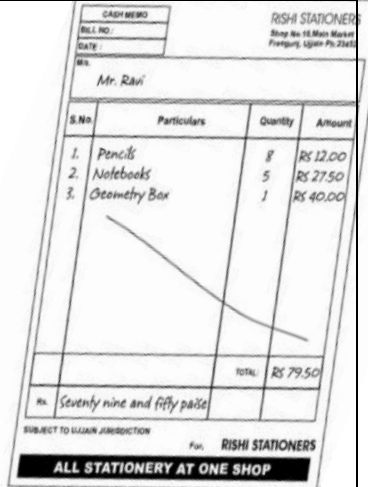
## Question Paper Set 3

**Subject: Mathematics**  
**Grade: 5<sup>th</sup>**

Q. N	Folder name & Question Code	Topic	Question with Answer Options	Image (If Any)	Correct Answer (Option -A,B,C,D )
------	-----------------------------	-------	------------------------------	----------------	-----------------------------------

1	1_2 Mathematics 6770	Ch-1 The Fish Tale	What is four thousand and two in numerals?		D		
			<b>Answer Options</b>				
			<b>Option A</b>	<b>Option B</b>		<b>Option C</b>	<b>Option D</b>
			40002	4200	402	4002	

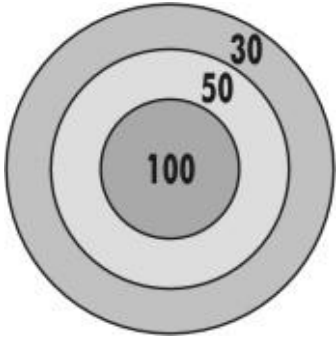
2	1_2 Mathematics 6771	Ch-1 The Fish Tale	Which number is 100 more than 2346?		B		
			<b>Answer Options</b>				
			<b>Option A</b>	<b>Option B</b>		<b>Option C</b>	<b>Option D</b>
			2246	2446	2356	3346	

3	1_2 Mathematics 6784	Ch-1 The Fish Tale	Carefully study this bill Ravi got and answer question.			C	
			If Ravi had paid the shopkeeper Rs. 100/- for all the above items, how much change would he have received?				
			<b>Answer Options</b>				
			<b>Option A</b>	<b>Option B</b>	<b>Option C</b>	<b>Option D</b>	
			Rs. 30.50	Rs. 21.50	Rs. 20.50	Rs. 20	

4	3_18 Math  3234	Ch-1 The Fish Tale	What number comes in the blank? $400 - 5 + 40 = 500 - \underline{\quad}$		C	
		Answer Options				
		Option A	Option B	Option C	Option D	
		245	165	65	35	


5	5_26 Mathematics 1758	Ch-1 THE FISH TALE	<p>The time line below gives the years of some important inventions in the field of transport. Study it to answer the question.</p> <p>The 'Railroad locomotive' was invented more than 100 years after the steam engine but more than 50 years before the diesel engine. Which of the following could be the year of invention of the 'Railroad locomotive'?</p>			B	
		Answers Options					
		Option A	Option B	Option C	Option D		
		1843	1814	1802	1795		

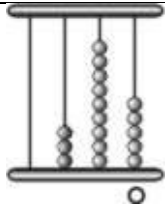
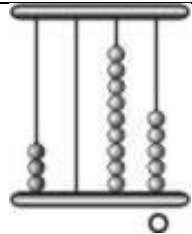
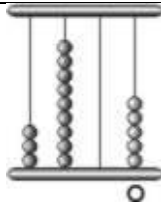
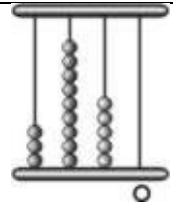
6	5_27 MATHEMATICS 8300	Ch-1 THE FISH TALE	<p>17 children arrange their shoes in a single row outside their music class. The shoes, arranged in pairs, are placed closely - touching each other.</p> <p>How many shoes in the row are touching a different child's shoe?</p>		C	
		Answers Options				
		Option A	Option B	Option C	Option D	
		15	17	32	34	

7	5_29 Mathematics  11566	Ch-1 THE FISH TALE	<p>The question is based on this dartboard. In this game, a player scores points by throwing darts at the board. Points are earned according to the area of the dartboard where the dart lands.</p> <p><b>What would be the MINIMUM number of throws needed to get a total score of 230 on this dartboard?</b></p>		B	
		Answers Options				
		Option A	Option B	Option C		Option D
		2	3	4		5
8	5_27 Mathematics 8295	Ch-1 THE FISH TALE	<p><b>Ram has a total of 108 tapes and CD's in his collection. He has 3 times as many tapes as CD's. How many more tapes does he have than CD's?</b></p>		B	
		Answers Options				
		Option A	Option B	Option C		Option D
		72	54	<b>34</b>		27

9	3_19 Mathematics 2647	Ch-1 THE FISH TALE	Sayed has a box containing 10 crayons that are red, blue or yellow. 3 of the crayons are blue and 9 are not red. How many yellow crayons are there in the box?		C
		Answers Options			
		Option A	Option B	Option C	Option D
		1	3	6	9

10	3_19 Mathematic 2634	Ch-1 THE FISH TALE	A clock is 55 minutes slow. When it shows the time as 7:55, what is the actual time?		A
		Answers Options			
		Option A	Option B	Option C	Option D
		8:50	7:45	8:10	7:00

11	5_26 Mathematics 1754	Ch-1 THE FISH TALE	In the picture below, about how long is the matchstick if the height of the candle is 12 cm?		B
		Answers Options			
		Option A	Option B	Option C	Option D
		3 cm	4cm	5 cm	7 cm

12	5_28 Mathematics 9912	Ch-1 The fish tale	<b>Which abacus shows the number three thousand nine hundred and five? (The ones' place is marked as 'O')</b>		
		Answers Options			
		Option A	Option B	Option C	Option D
					

13	3_19 Mathematics 2641	Ch-1 THE FISH TALE	<b>Rajesh played computer games from 10:19 a.m. to 1:51 p.m. For how much time did he play?</b>		
		Answers Options			
		Option A	Option B	Option C	Option D
		<b>2 hour 32 minutes</b>	<b>3 hours 32 minutes</b>	<b>3 hours 42 minutes</b>	<b>9 hours 32 minutes</b>

14	5_26 Mathematics 1757	Ch-1 THE FISH TALE	The time line below gives the years of some important inventions in the field of transport. Study it to answer the question.  <b>How many years passed between the invention of the submarine and that of the airplane?</b>		D	
		Answers Options				
		Option A	Option B	Option C		Option D
		272	228	191		128

15	5_27 Mathematics 8301	Ch-1 THE FISH TALE	<b>How many times would I be writing the digit 2 if I wrote down ALL THE ODD NUMBERS from 300 to 900 once?</b>		C	
		Answers Options				
		Option A	Option B	Option C		Option D
		70	50	30		0