
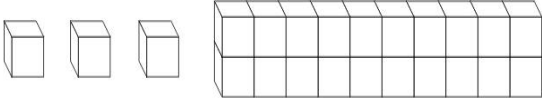
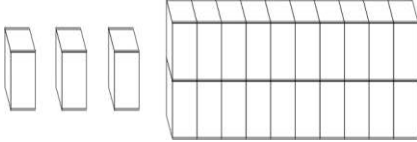
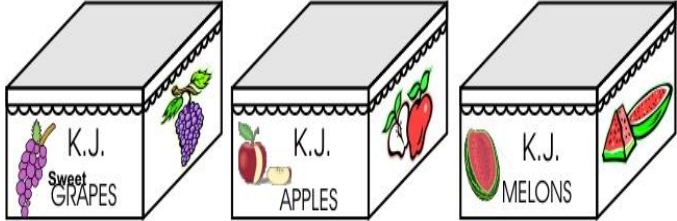
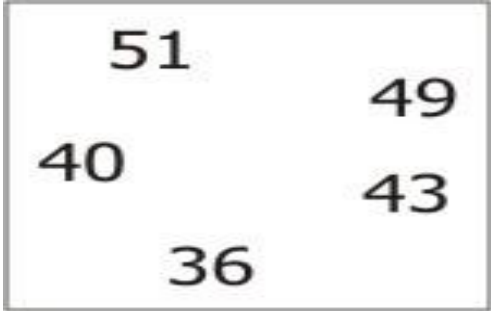
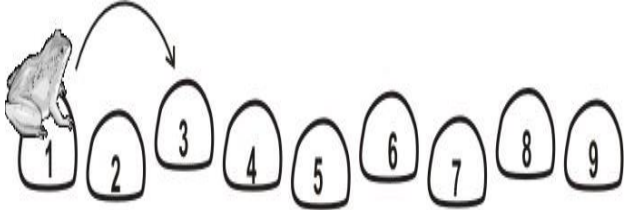








Subject: Mathematics Grade -3 Set -2

S.N	Folder Number & Question Code	Topic	Question with Answer Options	Image (If Any)	Correct Answer (Option-A,B,C,D)				
1.	5_29 Mathematics 11470	Fun with Numbers	Ram has MORE THAN 25 books. Sam has 5 books MORE THAN Ram. The number of books with Sam could be		D				
						Answer Options			
						Option A	Option B	Option C	Option D
						20	29	30	34
2.	2_11 Mathematics 4233	Fun with Numbers	Which of these numbers is between 67 and 76?		B				
						Answer Options			
						Option A	Option B	Option C	Option D
						77	70	66	60

S.N	Folder Number & Question Code	Topic	Question with Answer Options	Image (If Any)	Correct Answer (Option-A,B,C,D)				
3.	5_29 Mathematics 11457	Fun with Numbers	Seventy nine can be written as		D				
						Answer Options			
						Option A	Option B	Option C	Option D
						7 + 9	7 + 90	70 + 90	9 + 70
4.	5_29 Mathematics 11460	Fun with Numbers	The number which comes just after 5 TENS is		C				
						Answer Options			
						Option A	Option B	Option C	Option D
						16	49	51	60

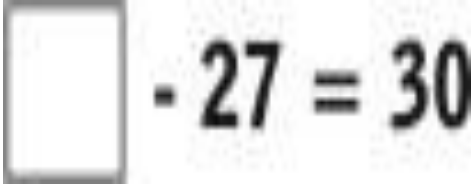
S.N	Folder Number & Question Code	Topic	Question with Answer Options	Image (If Any)	Correct Answer (Option-A,B,C,D)		
5.	5_27 Mathematics 8196	Fun with Numbers	<p>If the number 12 is represented as</p>  <p>Which number is represented below?</p> 		B		
			Answer Options				
			Option A	Option B		Option C	Option D
			13	23		31	32
6.	5_27 Mathematics 8202	Fun with Numbers	<p>3 equal sized boxes are completely filled with fruits - Box 1 with grapes, Box 2 with apples and Box 3 with melons. Which box has the greatest number of fruits?</p>	 <p style="text-align: center;">BOX 1 BOX 2 BOX 3</p>	A		
			Answer Options				
			Option A	Option B		Option C	Option D
			Box 1	Box 2		Box 3	All have the same number

S.N	Folder Number & Question Code	Topic	Question with Answer Options	Image (If Any)	Correct Answer (Option-A,B,C,D)				
7.	5_26 Mathematics 1421	Fun with Numbers	Look at the numbers in this box. Which of the following is true about the numbers in the box?		C				
						Answer Options			
						Option A	Option B	Option C	Option D
						They are all greater than 40	They are all between 30 and 50	They are all between 35 and 55	They are all less than 50
8.	5_27 Mathematics 8220	Fun with Numbers	A frog starts from Stone 1 and goes to the other side by jumping on every second stone. Which stones will the frog jump on?		B				
						Answer Options			
						Option A	Option B	Option C	Option D
						stones 3 and 4 only	stones 3, 5, 7 and 9	stones 2, 4, 6 and 8	stone 5 only

S.N	Folder Number & Question Code	Topic	Question with Answer Options	Image (If Any)	Correct Answer (Option-A,B,C,D)
9.	5_26 Mathematics 1430	Fun with Numbers	Seema is making vegetable soup. The picture shows the number of vegetables she used. Look at the picture and answer the question. How many more onions did Seema use than carrots?	Potatoes 	B
				Carrots 	
				Onions 	
				Answer Options	
		Option A	Option B	Option C	Option D
		1	2	3	4
10.	5_26 Mathematics 1431	Fun with Numbers	Seema is making vegetable soup. The picture shows the number of vegetables she used. Look at the picture and answer the question. How many KINDS of vegetables did Seema use for the soup?	Potatoes 	A
				Carrots 	
				Onions 	
				Answer Options	
		Option A	Option B	Option C	Option D
		three	Four	Six	Eight

S.N	Folder Number & Question Code	Topic	Question with Answer Options	Image (If Any)	Correct Answer (Option-A,B,C,D)				
11.	5_28 Mathematics 9842	Fun with Numbers	Which abacus has more than 5 beads in every row?		C				
						Answer Options			
						Option A	Option B	Option C	Option D
12.	3_19 Mathematics 2560	Fun with Numbers	The same number has to be put in BOTH the boxes below. What is the number?	$2 \times 8 = \square \times \square$	A				
						Answer Options			
						Option A	Option B	Option C	Option D
				4	5	8	16		

S.N	Folder Number & Question Code	Topic	Question with Answer Options	Image (If Any)	Correct Answer (Option-A,B,C,D)				
13.	3_19 Mathematics 2561	Fun with Numbers	Answer the following.	<p>■ is a number such that the number sentence $15 - \square = 9$ is true.</p> <p>Which of the following number sentences is also true?</p>	B				
						Answer Options			
						Option A	Option B	Option C	Option D
						$15 + \square = 9$	$9 + \square = 15$	$\square + 15 = 9$	$\square \times 9 = 15$
14.	5_28 Mathematics 9867	Fun with Numbers	Ann has the following number cards: Using these two cards, she can make a number between :	<div style="display: flex; justify-content: space-around; align-items: center;"> <div style="border: 1px solid black; padding: 5px; width: 40px; text-align: center;">6</div> <div style="border: 1px solid black; padding: 5px; width: 40px; text-align: center;">2</div> </div>	B				
						Answer Options			
						Option A	Option B	Option C	Option D
						20 and 25.	25 and 30.	50 and 60.	70 and 80.

S.N	Folder Number & Question Code	Topic	Question with Answer Options	Image (If Any)	Correct Answer (Option-A,B,C,D)
15.	5_29 Mathematics 11458	Fun with Numbers	What number goes in the box below to make the number sentence true?		D
Answer Options					
Option A		Option B		Option C	
3		13		50	
57					