























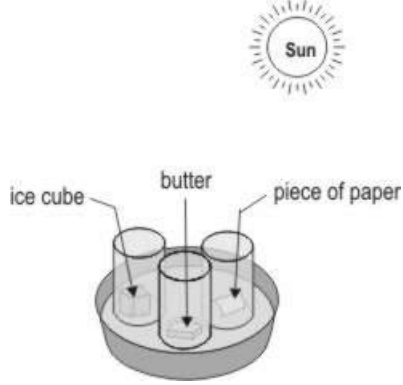
S.N	Folder Number & Question Code	Topic	Question with Answer Options	Image (If Any)	Correct Answer (Option-A, B, C, D)												
1	4_24 Science 10166	EATING TOGETHER Ch-20	How will you change a cup of curds (dahi) to milk?		D												
<table border="1"> <thead> <tr> <th colspan="4" data-bbox="344 824 1619 867">Answer Options</th> </tr> <tr> <th data-bbox="344 867 665 902">Option A</th> <th data-bbox="665 867 982 902">Option B</th> <th data-bbox="982 867 1299 902">Option C</th> <th data-bbox="1299 867 1619 902">Option D</th> </tr> </thead> <tbody> <tr> <td data-bbox="344 902 665 1008">Add a little milk to the curd.</td> <td data-bbox="665 902 982 1008">Add a little salt to the curd.</td> <td data-bbox="982 902 1299 1008">Add a little sugar to the curd.</td> <td data-bbox="1299 902 1619 1008">We cannot change curd into milk.</td> </tr> </tbody> </table>						Answer Options				Option A	Option B	Option C	Option D	Add a little milk to the curd.	Add a little salt to the curd.	Add a little sugar to the curd.	We cannot change curd into milk.
Answer Options																	
Option A	Option B	Option C	Option D														
Add a little milk to the curd.	Add a little salt to the curd.	Add a little sugar to the curd.	We cannot change curd into milk.														
2	3_16 Science 2306	Food and Fun Ch-21	Which of the following nutrients is very important for building bones and teeth?		A												
<table border="1"> <thead> <tr> <th colspan="4" data-bbox="344 1227 1619 1269">Answer Options</th> </tr> <tr> <th data-bbox="344 1269 665 1305">Option A</th> <th data-bbox="665 1269 982 1305">Option B</th> <th data-bbox="982 1269 1299 1305">Option C</th> <th data-bbox="1299 1269 1619 1305">Option D</th> </tr> </thead> <tbody> <tr> <td data-bbox="344 1305 665 1382">Calcium</td> <td data-bbox="665 1305 982 1382">Iron</td> <td data-bbox="982 1305 1299 1382">Vitamins</td> <td data-bbox="1299 1305 1619 1382">Fats</td> </tr> </tbody> </table>						Answer Options				Option A	Option B	Option C	Option D	Calcium	Iron	Vitamins	Fats
Answer Options																	
Option A	Option B	Option C	Option D														
Calcium	Iron	Vitamins	Fats														














S. N	Folder Number & Question Code	Topic	Question with Answer Options	Image (If Any)	Correct Answer (Option- A, B, C, D)		
3	3_17 Science 1610	Food and Fun Ch-21	Which of these is made from a part of the maize plant?		D		
Answer Options							
Option A		Option B		Option C		Option D	
 A.		 B.		 C.		 D.	
4	4_23 Science 8921	Food and Fun Ch-21	Which of the following is used in many kitchens to cook food?		C		
Answer Options							
Option A		Option B		Option C		Option D	
Petrol		Diesel		LPG		CNG	

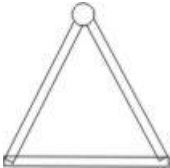
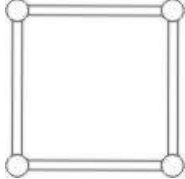








S. N	Folder Number & Question Code	Topic	Question with Answer Options	Image (If Any)	Correct Answer (Option- A, B, C, D)												
5	4_23 Science 8938	Food and Fun Ch-21	Food items of all kinds are necessary for the human body to function properly. The table below gives the names of a few food items under three different categories. Which of the following food items should be placed in the category of energy giving foods?	<table border="1"> <thead> <tr> <th data-bbox="1220 321 1409 354">Body building foods</th> <th data-bbox="1409 321 1598 354">Energy giving foods</th> <th data-bbox="1598 321 1787 354">Disease fighting foods</th> </tr> </thead> <tbody> <tr> <td data-bbox="1220 354 1409 386">Milk</td> <td data-bbox="1409 354 1598 386">Oil</td> <td data-bbox="1598 354 1787 386">Whole cereals</td> </tr> <tr> <td data-bbox="1220 386 1409 418">Eggs</td> <td data-bbox="1409 386 1598 418">Nuts</td> <td data-bbox="1598 386 1787 418">Fruits</td> </tr> <tr> <td data-bbox="1220 418 1409 451">Fish</td> <td data-bbox="1409 418 1598 451">Rice</td> <td data-bbox="1598 418 1787 451">Curd</td> </tr> </tbody> </table>	Body building foods	Energy giving foods	Disease fighting foods	Milk	Oil	Whole cereals	Eggs	Nuts	Fruits	Fish	Rice	Curd	C
Body building foods	Energy giving foods	Disease fighting foods															
Milk	Oil	Whole cereals															
Eggs	Nuts	Fruits															
Fish	Rice	Curd															
<table border="1"> <thead> <tr> <th colspan="4" data-bbox="443 821 1709 857">Answer Options</th> </tr> <tr> <th data-bbox="443 857 758 915">Option A</th> <th data-bbox="758 857 1073 915">Option B</th> <th data-bbox="1073 857 1388 915">Option C</th> <th data-bbox="1388 857 1709 915">Option D</th> </tr> </thead> <tbody> <tr> <td data-bbox="443 915 758 987">Meat</td> <td data-bbox="758 915 1073 987">Leafy vegetables</td> <td data-bbox="1073 915 1388 987">Sugar</td> <td data-bbox="1388 915 1709 987">Drumstick</td> </tr> </tbody> </table>						Answer Options				Option A	Option B	Option C	Option D	Meat	Leafy vegetables	Sugar	Drumstick
Answer Options																	
Option A	Option B	Option C	Option D														
Meat	Leafy vegetables	Sugar	Drumstick														


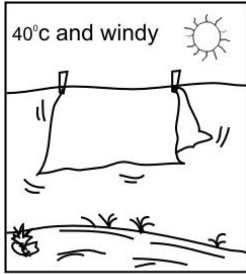

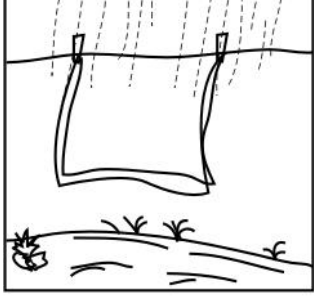
S.N	Folder Number & Question Code	Topic	Question with Answer Options	Image (If Any)	Correct Answer (Option-A, B, C, D)				
6	4_24 Science 10152	Food and Fun Ch-21	Vijaya is moving on roller skates. From where does she get the energy to skate?		B				
						Answer Options			
						Option A	Option B	Option C	Option D
		She does not need energy to move on roller skates.	She gets it from the food she eats.	She gets it from the air around her.	She gets it from the wheels of the skates.				
7	3_16 Science 2311	The World in my Home Ch-22	<p>Observe the figure of a television remote given below and answer the question.</p> <p>To increase the sound in your television using this remote control, you will press the button marked:</p>		A				
						Answer Options			
						Option A	Option B	Option C	Option D
									

S. N	Folder Number & Question Code	Topic		Question with Answer Options	Image (If Any)	Correct Answer (Option- A, B, C, D)												
8	4_23 Science 8930	The World in my Home Ch-22	If these items are left outside in the sun on a hot day, which of them is likely to start melting first?		C													
<table border="1" style="width: 100%; border-collapse: collapse;"> <thead> <tr> <th colspan="4" data-bbox="579 634 1919 675">Answer Options</th> </tr> <tr> <th data-bbox="579 675 947 711">Option A</th> <th data-bbox="947 675 1266 711">Option B</th> <th data-bbox="1266 675 1600 711">Option C</th> <th data-bbox="1600 675 1919 711">Option D</th> </tr> </thead> <tbody> <tr> <td data-bbox="579 711 947 901" style="text-align: center;">  </td> <td data-bbox="947 711 1266 901" style="text-align: center;">  </td> <td data-bbox="1266 711 1600 901" style="text-align: center;">  </td> <td data-bbox="1600 711 1919 901" style="text-align: center;">  </td> </tr> </tbody> </table>							Answer Options				Option A	Option B	Option C	Option D				
Answer Options																		
Option A	Option B	Option C	Option D															
																		

S. N	Folder Number & Question Code	Topic	Question with Answer Options	Image (If Any)			Correct Answer (Option-A, B, C, D)												
9	4_23 Science 8949	The World in my Home Ch-22	Use the information given in the table below to answer the question. Air" can be put in place of"	<table border="1"> <thead> <tr> <th data-bbox="1094 212 1255 282">State of matter</th> <th data-bbox="1255 212 1661 282">Description</th> <th data-bbox="1661 212 1795 282">Example</th> </tr> </thead> <tbody> <tr> <td data-bbox="1094 282 1255 342">Solid</td> <td data-bbox="1255 282 1661 342">Has a definite shape and size</td> <td data-bbox="1661 282 1795 342">W</td> </tr> <tr> <td data-bbox="1094 342 1255 407">X</td> <td data-bbox="1255 342 1661 407">Has definite volume but no definite shape</td> <td data-bbox="1661 342 1795 407">Water</td> </tr> <tr> <td data-bbox="1094 407 1255 472">Y</td> <td data-bbox="1255 407 1661 472">Has no definite volume or shape</td> <td data-bbox="1661 407 1795 472">Z</td> </tr> </tbody> </table>			State of matter	Description	Example	Solid	Has a definite shape and size	W	X	Has definite volume but no definite shape	Water	Y	Has no definite volume or shape	Z	D
State of matter	Description	Example																	
Solid	Has a definite shape and size	W																	
X	Has definite volume but no definite shape	Water																	
Y	Has no definite volume or shape	Z																	
<table border="1"> <thead> <tr> <th colspan="4" data-bbox="478 529 1745 570">Answer Options</th> </tr> <tr> <th data-bbox="478 570 793 610">Option A</th> <th data-bbox="793 570 1108 610">Option B</th> <th data-bbox="1108 570 1430 610">Option C</th> <th data-bbox="1430 570 1745 610">Option D</th> </tr> </thead> <tbody> <tr> <td data-bbox="478 610 793 686">W</td> <td data-bbox="793 610 1108 686">X</td> <td data-bbox="1108 610 1430 686">Y</td> <td data-bbox="1430 610 1745 686">Z</td> </tr> </tbody> </table>				Answer Options				Option A	Option B	Option C	Option D	W	X	Y	Z				
Answer Options																			
Option A	Option B	Option C	Option D																
W	X	Y	Z																
10	4_24 Science 10158	The World in my Home Ch-22	Vinay put a piece of butter, an ice cube and a piece of paper into three identical glasses and put them all in the hot Sun for about 5 minutes. What was he probably trying to find out?				D												
<table border="1"> <thead> <tr> <th colspan="4" data-bbox="478 1227 1745 1268">Answer Options</th> </tr> <tr> <th data-bbox="478 1268 793 1325">Option A</th> <th data-bbox="793 1268 1108 1325">Option B</th> <th data-bbox="1108 1268 1430 1325">Option C</th> <th data-bbox="1430 1268 1745 1325">Option D</th> </tr> </thead> <tbody> <tr> <td data-bbox="478 1325 793 1448">Which of these is a solid?</td> <td data-bbox="793 1325 1108 1448">What are all these made up of?</td> <td data-bbox="1108 1325 1430 1448">How hot is it outside?</td> <td data-bbox="1430 1325 1745 1448">Which of these melts the fastest?</td> </tr> </tbody> </table>				Answer Options				Option A	Option B	Option C	Option D	Which of these is a solid?	What are all these made up of?	How hot is it outside?	Which of these melts the fastest?				
Answer Options																			
Option A	Option B	Option C	Option D																
Which of these is a solid?	What are all these made up of?	How hot is it outside?	Which of these melts the fastest?																

S · N	Folder Number & Question Code	Topic	Question with Answer Options	Image (If Any)	Correct Answer (Option-A, B, C, D)												
11	4_25 Science 10679	The World in my Home Ch-22	At a funfair, Sehwag noticed the various balloons shown above. Based on his observation, Sehwag correctly concluded that		C												
<table border="1" style="width: 100%; text-align: center;"> <thead> <tr> <th colspan="4">Answer Options</th> </tr> <tr> <th>Option A</th> <th>Option B</th> <th>Option C</th> <th>Option D</th> </tr> </thead> <tbody> <tr> <td>all gases release energy.</td> <td>gases form when liquids are heated.</td> <td>gases take the shape of their containers.</td> <td>all gases have weight.</td> </tr> </tbody> </table>						Answer Options				Option A	Option B	Option C	Option D	all gases release energy.	gases form when liquids are heated.	gases take the shape of their containers.	all gases have weight.
Answer Options																	
Option A	Option B	Option C	Option D														
all gases release energy.	gases form when liquids are heated.	gases take the shape of their containers.	all gases have weight.														
12	4_23 Science 8948	Pochampalli Ch-23	From which of these sources do we get silk threads?		A												
<table border="1" style="width: 100%; text-align: center;"> <thead> <tr> <th colspan="4">Answer Options</th> </tr> <tr> <th>Option A</th> <th>Option B</th> <th>Option C</th> <th>Option D</th> </tr> </thead> <tbody> <tr> <td>  </td> <td>  </td> <td>  </td> <td>  </td> </tr> </tbody> </table>						Answer Options				Option A	Option B	Option C	Option D				
Answer Options																	
Option A	Option B	Option C	Option D														
																	

S. N	Folder Number & Question Code	Topic	Question with Answer Options	Image (If Any)	Correct Answer (Option-A, B, C, D)												
13	4_24 Science 10180	Pochampalli Ch-23	All the shapes given below are made from wooden sticks (which do not bend) and joined at the corners with clay. Which of them will NOT change shape if pressed at one end?		A												
<table border="1" style="width: 100%; text-align: center;"> <thead> <tr> <th colspan="4">Answer Options</th> </tr> <tr> <th>Option A</th> <th>Option B</th> <th>Option C</th> <th>Option D</th> </tr> </thead> <tbody> <tr> <td data-bbox="506 634 816 829">  </td> <td data-bbox="821 634 1136 829">  </td> <td data-bbox="1140 634 1587 829">  </td> <td data-bbox="1591 634 1906 829">None of them will change shape</td> </tr> </tbody> </table>						Answer Options				Option A	Option B	Option C	Option D				None of them will change shape
Answer Options																	
Option A	Option B	Option C	Option D														
			None of them will change shape														
14	2_9 4863	Pochampalli Ch-23	A class had a torn umbrella. Which of the following materials that the teacher gave them, should they use to repair the umbrella?		A												
<table border="1" style="width: 100%; text-align: center;"> <thead> <tr> <th colspan="4">Answers Options</th> </tr> <tr> <th>Option A</th> <th>Option B</th> <th>Option C</th> <th>Option D</th> </tr> </thead> <tbody> <tr> <td data-bbox="506 1292 827 1580">A piece from an old raincoat</td> <td data-bbox="831 1292 1136 1580">A piece of newspaper</td> <td data-bbox="1140 1292 1430 1580">A piece of cardboard</td> <td data-bbox="1434 1292 1703 1580">A piece of silk cloth</td> </tr> </tbody> </table>						Answers Options				Option A	Option B	Option C	Option D	A piece from an old raincoat	A piece of newspaper	A piece of cardboard	A piece of silk cloth
Answers Options																	
Option A	Option B	Option C	Option D														
A piece from an old raincoat	A piece of newspaper	A piece of cardboard	A piece of silk cloth														

S. N	Folder Number & Question Code	Topic	Question with Answer Options	Image (If Any)	Correct Answer (Option-A, B, C, D)		
15	2_9 Science 5940	Pochampalli Ch-23	Which cloth will dry first? (The cloth pieces are identical and equally wet in the beginning.)		B		
Answer Options							
Option A		Option B		Option C		Option D	
 <p style="text-align: center;">A</p>		 <p style="text-align: center;">B</p>		 <p style="text-align: center;">C</p>		 <p style="text-align: center;">D</p>	

