


Set 1-EVS-ClassV

Q.No.	Folder Name & Question Code	Topic	Question with Answer options	Image (if any)	Correct answer (Option-A,B,C,D)				
1	1_3 Science 6562	Super senses	Animals have features that help them hide themselves from both hunters and their prey. Which of these is an example of such a feature?		A				
						Answer Options			
						Option A	Option B	Option C	Option D
						the stripes of a tiger	the trunk of an elephant	the horns of a cow	the gills of a fish

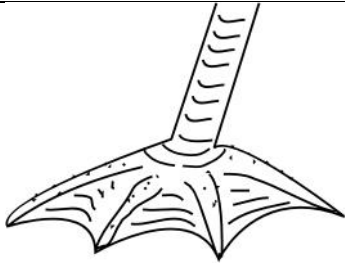
Q.No.	Folder Name & Question Code	Topic	Question with Answer options	Image (if any)	Correct answer (Option-A,B,C,D)				
2	1_3 Science 6566	Super senses	All living things react to sound, touch etc. Whatever causes a living thing to react is called a stimulus. The reaction is called a response. Which of these is an example of a STIMULUS-RESPONSE?		A				
						Answer Options			
						Option A	Option B	Option C	Option D
						A girl covering her eyes when a beam of light falls on her face.	A kitten playing with a ball of wool	A boy studying for a test on the next day.	A cow eating grass.

Q.No.	Folder Name & Question Code	Topic	Question with Answer options	Image (if any)	Correct answer (Option-A,B,C,D)				
3	1_3 Science 6571	Super senses	Fish have fins; in the same way, birds have _____		C				
						Answer Options			
						Option A	Option B	Option C	Option D
						beaks	lungs	feathers	gills





Q.No.	Folder Name & Question Code	Topic	Question with Answer options	Image (if any)	Correct answer (Option-A,B,C,D)
4	1_3 Science 6581	Super senses	Raghav and his friends have been given 3 substances and asked to find out which of them is the hardest. Which of these is the most scientific way to start?		A
Answer Options					
		Option A	Option B	Option C	Option D
		Raghav: Let us understand what is the meaning of hard and a way to measure it.""	Ramesh: This piece of glass is the hardest - I have read that glass is very hard.""	Sajida: Let us ask our seniors the answer - they must have done this last year.""	Sanjana: This is not in our syllabus - how can we do it?""


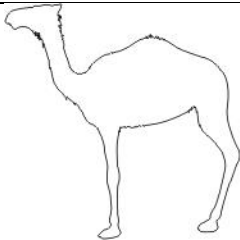


Q.No.	Folder Name & Question Code	Topic	Question with Answer options	Image (if any)	Correct answer (Option-A,B,C,D)				
5	1_3 Science 6583	Super senses	Here is the picture of a camel. Rashid observes it and writes these points in his notebook. Which of these is NOT an OBSERVATION?		C				
						Answer Options			
						Option A	Option B	Option C	Option D
						A camel has a short tail.	A camel has long and well-padded legs.	A camel eats leaves of the neem tree.	A camel has a hump on its back.





Q.No.	Folder Name & Question Code	Topic	Question with Answer options	Image (if any)	Correct answer (Option-A,B,C,D)	
6	1_3 Science 6584	Super senses	Adaptation means adjusting to the conditions in the surroundings. This leads to different habits, behaviour and body features in animals. Which of the following is an example of adaptation?		D	
		Answer Options				
		Option A	Option B	Option C	Option D	
		lions eating deer	human beings wearing spectacles	squirrels being fond of nuts	thick fur coats on the bodies of polar bears	



Q.No.	Folder Name & Question Code	Topic	Question with Answer options	Image (if any)	Correct answer (Option-A,B,C,D)
7	1_3 Science 6589	Super senses	This is an image of a bird's foot. Where would you be MOST likely to find such a bird?		B
Answer Options					
		Option A	Option B	Option C	Option D
		a forest	a lake	a mountain	a desert





Q.No.	Folder Name & Question Code	Topic	Question with Answer options	Image (if any)	Correct answer (Option-A,B,C,D)
8	1_3 Science 7247	Super senses	From where do fish in the sea get oxygen to breathe?		C
Answer Options					
		Option A	Option B	Option C	Option D
		Fish do not need oxygen to breathe.	Fish get oxygen from the sea weeds.	Fish breathe the oxygen dissolved in water.	Fish come up to the surface of the water to breathe.

Q.No.	Folder Name & Question Code	Topic	Question with Answer options	Image (if any)	Correct answer (Option-A,B,C,D)
9	1_3 Science 7262	Super senses	Which of these animals does NOT lay eggs?		D
Answer Options					
Option A		Option B		Option C	
A.  Fish		B.  Frog		C.  Hen	
				D.  Mouse	









Q.No.	Folder Name & Question Code	Topic	Question with Answer options	Image (if any)	Correct answer (Option-A,B,C,D)
10	2_9 Science 5961	Super senses	Animals that are active in the night and sleep during the day are called NOCTURNAL. Which of the following is a NOCTURNAL animal?		A
Answer Options					
		Option A	Option B	Option C	Option D
					

Q.No.	Folder Name & Question Code	Topic	Question with Answer options	Image (if any)	Correct answer (Option-A,B,C,D)
11	2_9 Science 5964	Super senses	Which of these may be the footprints of a bird?		D
Answer Options					
		Option A	Option B	Option C	Option D
					

Q.No.	Folder Name & Question Code	Topic	Question with Answer options	Image (if any)	Correct answer (Option-A,B,C,D)		
12	2_9 Science 5980	Super senses	Observe the given two groups of animals carefully. The best classification for these two groups would be:	<div style="display: flex; flex-direction: column; align-items: flex-start;"> <div style="display: flex; align-items: center; margin-bottom: 10px;"> Group 1  </div> <div style="display: flex; align-items: center;"> Group 2  </div> </div>	B		
Answer Options							
Option A		Option B		Option C		Option D	
Group 1 - pet animals Group 2 - wild animals		Group 1 - land animals Group 2 - water animals		Group 1 - birds Group 2 - fish		Group 1 - insects Group 2 - fish	

Q.No.	Folder Name & Question Code	Topic	Question with Answer options	Image (if any)	Correct answer (Option-A,B,C,D)
13	2_9 Science 5989	Super senses	Identify the tooth that is used by us for cutting and shearing (tearing) of food.		C
Answer Options					
		Option A	Option B	Option C	Option D
		 Molar A	 Incisor B	 Canine C	 Pre-molar D

Q.No.	Folder Name & Question Code	Topic	Question with Answer options	Image (if any)	Correct answer (Option-A,B,C,D)
14	2_9 Science 5990	Super senses	Normally people have only one_____.		D
Answer Options					
		Option A	Option B	Option C	Option D
		lung	kidney	eye	food pipe

Q.No.	Folder Name & Question Code	Topic	Question with Answer options	Image (if any)	Correct answer (Option-A,B,C,D)	
15	2_9 Science 5991	Super senses	The eye has an opening through which light enters. It is called the PUPIL. Uma was watching a Hindi film. How would her pupils look: (i) inside the theatre and (ii) after she stepped out in the sun?	<div style="display: flex; justify-content: space-around;"> <div style="text-align: center;"> <p>Inside the theatre</p> <p>A </p> <p>B </p> <p>C </p> <p>D </p> </div> <div style="text-align: center;"> <p>After she stepped out in the sun</p> <p></p> <p></p> <p></p> <p></p> </div> </div>	A	
Answer Options						
Option A		Option B		Option C		Option D
A		B		C		D