

































Q N	Folder Name & Question Code	Topic	Questions With Answers	Images (If Any)	Correct Answers (Options A B C D)												
1	4_25 Science 149	Food	Which of the following animals eats ONLY plants?		C												
<table border="1" style="width: 100%; text-align: center;"> <thead> <tr> <th colspan="4" data-bbox="604 660 2142 698">Answers Options</th> </tr> <tr> <th data-bbox="604 703 911 748">Option A</th> <th data-bbox="919 703 1271 748">Option B</th> <th data-bbox="1279 703 1623 748">Option C</th> <th data-bbox="1631 703 2142 748">Option D</th> </tr> </thead> <tbody> <tr> <td data-bbox="604 753 911 1003">  </td> <td data-bbox="919 753 1271 1003">  </td> <td data-bbox="1279 753 1623 1003">  </td> <td data-bbox="1631 753 2142 1003">  </td> </tr> </tbody> </table>						Answers Options				Option A	Option B	Option C	Option D				
Answers Options																	
Option A	Option B	Option C	Option D														
																	
2	4_25 226	Food We Eat	Which of these could weigh about 1 kg?		D												
<table border="1" style="width: 100%; text-align: center;"> <thead> <tr> <th colspan="4" data-bbox="604 1200 2048 1237">Answers Options</th> </tr> <tr> <th data-bbox="604 1242 973 1287">Option A</th> <th data-bbox="981 1242 1330 1287">Option B</th> <th data-bbox="1338 1242 1688 1287">Option C</th> <th data-bbox="1696 1242 2048 1287">Option D</th> </tr> </thead> <tbody> <tr> <td data-bbox="604 1292 973 1507">  a tomato </td> <td data-bbox="981 1292 1330 1507">  a potato </td> <td data-bbox="1338 1292 1688 1507">  a lemon </td> <td data-bbox="1696 1292 2048 1507">  a cauliflower </td> </tr> </tbody> </table>						Answers Options				Option A	Option B	Option C	Option D	 a tomato	 a potato	 a lemon	 a cauliflower
Answers Options																	
Option A	Option B	Option C	Option D														
 a tomato	 a potato	 a lemon	 a cauliflower														

Q N	Folder Name & Question Code	Topic	Questions With Answers	Images (If Any)	Correct Answers (Options A B C D)
3	4_25 Science 147	Food	Sugar is made from		A
Answers Options					
		Option A	Option B	Option C	Option D
		 Sugarcane	 Sweet Potato	 Sea water	 Honey
4	4_25 274	Food We Eat	Which of the following should we do EVERYDAY without fail to remain healthy?		B
Answers Options					
		Option A	Option B	Option C	Option D
		Eat four chocolates.	Brush our teeth.	Cut our nails.	Change clothes three times a day.


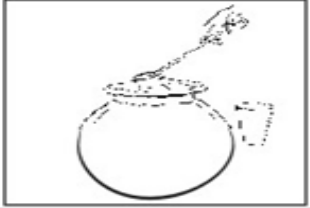
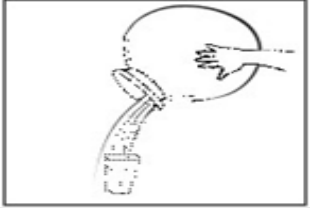
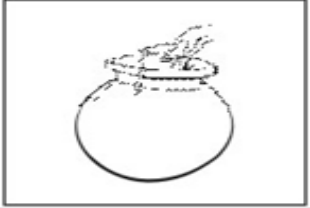
Q N	Folder Name & Question Code	Topic	Questions With Answers	Images (If Any)	Correct Answers (Options A B C D)
5	4_25 Science 152	Food	Which of the following vegetables is ONLY eaten after cooking?		B

Answers Options			
Option A	Option B	Option C	Option D
 Carrot	 Potato	 Onion	 Cabbage



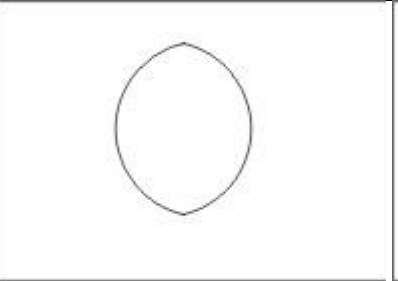
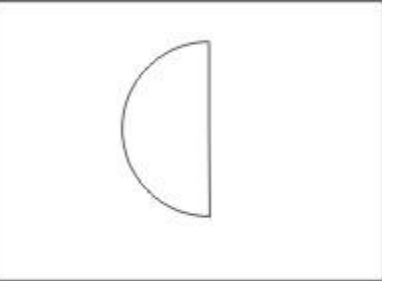
6	4_25 Science 197	Food	Which of these gives the hen its energy to run?		A
---	------------------------	------	---	--	---

Answers Options			
Option A	Option B	Option C	Option D
the food it eats	its wings	its strong legs	the wind


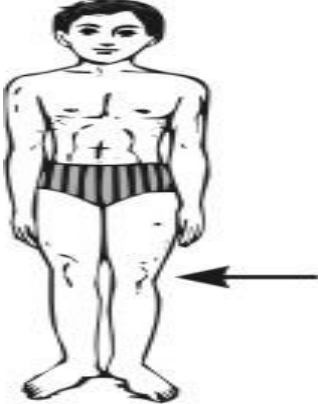
Q N	Folder Name & Question Code	Topic	Questions With Answers	Images (If Any)	Correct Answers (Options A B C D)
7	4_25 Science 195	Our Environment, Earth and Universe	Which of the following is the BEST way to take drinking water from a pot?		B













Answers Options			
Option A	Option B	Option C	Option D
			

8	4_25 Science 210	Our Environment, Earth and Universe	Which of these shapes does the moon NEVER take?		C
---	------------------------	-------------------------------------	---	--	---

Answers Options			
Option A	Option B	Option C	Option D
			

Q N	Folder Name & Question Code	Topic	Questions With Answers	Images (If Any)	Correct Answers (Options A B C D)	
9	4_25 Science 212	Our Environment, Earth and Universe	Which of these covers MOST part of the earth's surface?		C	
			Answers Options			
			Option A	Option B	Option C	Option D
			land	Air	water	oil
10	4_25 Science 225	Our Environment, Earth and Universe	Which of these is the farthest from you?		D	
			Answers Options			
			Option A	Option B	Option C	Option D
			clouds	a flying crow	a flying aero plane	the moon
11	4_25 Science 208	Our Environment, Earth and Universe	Which of these results due to the smoke from factories, cars and burning of garbage?		A	
			Answers Options			
			Option A	Option B	Option C	Option D
			air pollution	water pollution	sound pollution	soil pollution

Q N	Folder Name & Question Code	Topic	Questions With Answers	Images (If Any)	Correct Answers (Options A B C D)	
12	4_25 Science 223	Human Body	Raju's doctor checked him using the instrument shown in the figure. He checked Raju's		C	
			Answers Options			
			Option A	Option B	Option C	Option D
			Temperature	Heartbeat	Weight	Height
13	4_25 Science 129	Human Body	Which part of the body is the arrow pointing to?		C	
			Answers Options			
			Option A	Option B	Option C	Option D
			SHOULDER	CHEST	KNEE	ANKLE

Q N	Folder Name & Question Code	Topic	Questions With Answers	Images (If Any)	Correct Answers (Options A B C D)													
14	4_25 Science 131	Human Body (Sense Organs)	Kavitha thinks that the cooking gas in her house is leaking. Which of these helped her notice the leak ?		B													
			<table border="1" style="width: 100%; text-align: center;"> <thead> <tr> <th colspan="4">Answers Options</th> </tr> <tr> <th>Option A</th> <th>Option B</th> <th>Option C</th> <th>Option D</th> </tr> </thead> <tbody> <tr> <td></td> <td></td> <td></td> <td></td> </tr> </tbody> </table>				Answers Options				Option A	Option B	Option C	Option D				
Answers Options																		
Option A	Option B	Option C	Option D															
																		
15	4_25 Science 272	Human Body	How old may the oldest person in the world be?		C													
			<table border="1" style="width: 100%; text-align: center;"> <thead> <tr> <th colspan="4">Answers Options</th> </tr> <tr> <th>Option A</th> <th>Option B</th> <th>Option C</th> <th>Option D</th> </tr> </thead> <tbody> <tr> <td>50 years</td> <td>80 years</td> <td>110 years</td> <td>250 years</td> </tr> </tbody> </table>				Answers Options				Option A	Option B	Option C	Option D	50 years	80 years	110 years	250 years
Answers Options																		
Option A	Option B	Option C	Option D															
50 years	80 years	110 years	250 years															