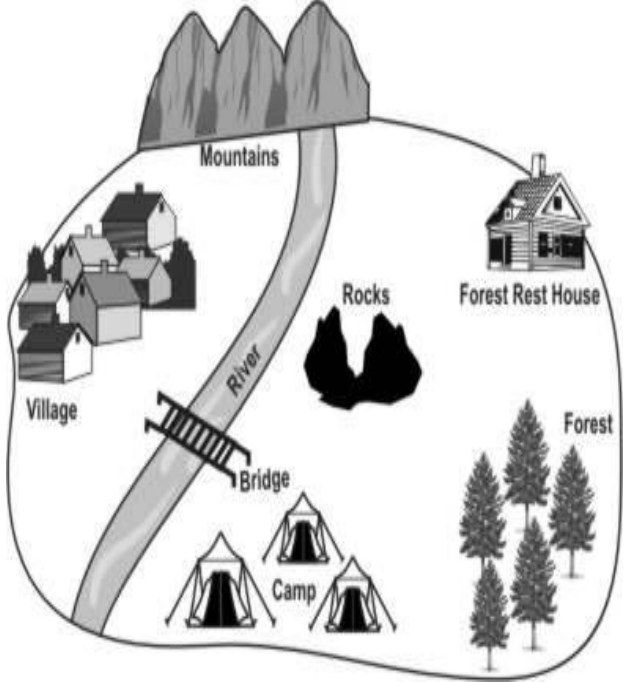





























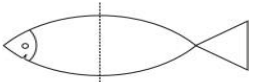
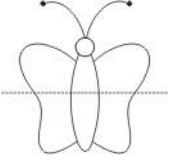
























































S.N	Folder Number & Question Code	Topic	Question with Answer Options	Image (If Any)	Correct Answer (Option-A,B,C,D)
1.	5_28 Mathematics 9852	Where to Look From	Which of the following is nearest to camp in given picture?		A
Answer Options					
Option A		Option B		Option C	
The bridge		The rocks		The mountains	
				The forest rest house	









S.N	Folder Number & Question Code	Topic	Question with Answer Options	Image (If Any)	Correct Answer (Option-A,B,C,D)				
2.	5_28 Mathematics 9853	Where to Look From	You will have to cross the river to go from _____.		B				
						Answer Options			
						Option A	Option B	Option C	Option D
						the village to the mountains	the camp to the village	the rocks to the camp	the camp to the forest
3.	5_27 Mathematics 8218	Where to Look From	Look at the given map. Sara walks in the direction shown and turns right at the crossing. She is now walking towards the _____.		A				
						Answer Options			
						Option A	Option B	Option C	Option D
						North	South	East	West






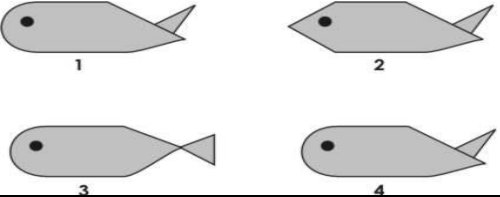
S.N	Folder Number & Question Code	Topic	Question with Answer Options	Image (If Any)	Correct Answer (Option-A,B,C,D)				
4.	5_29 Mathematics 11467	Where to Look From	Who is holding Atul's right hand?		A				
						Answer Options			
						Option A	Option B	Option C	Option D
						Rani	Aashi	John	Mili
5.	5_29 Mathematics 11481	Where to look From	Who is holding Aashi's hand but NOT John's?		C				
						Answer Options			
						Option A	Option B	Option C	Option D
						Mili	Rani	Atul	No one

S.N	Folder Number & Question Code	Topic	Question with Answer Options	Image (If Any)	Correct Answer (Option-A,B,C,D)																
6	5_27 Mathematics 8217	Where to Look From	Study the picture below to answer the question. In the picture, each box is named with a letter and number. The balloon is in box Z1 and the cup is in box Y3. If you draw a straight line from the glass to the ball, which box will you cross?	<table border="1"> <tr> <td></td> <td>X</td> <td>Y</td> <td>Z</td> </tr> <tr> <td>1</td> <td></td> <td></td> <td></td> </tr> <tr> <td>2</td> <td></td> <td></td> <td></td> </tr> <tr> <td>3</td> <td></td> <td></td> <td></td> </tr> </table>		X	Y	Z	1				2				3				A
	X	Y	Z																		
1																					
2																					
3																					
Answer Options																					
Option A		Option B		Option C																	
X2		Y2		Y3																	
				Option D																	
				Z2																	
7.	5_26 Mathematics 1420	Where to look From	Which picture is divided into two exactly equal parts by the dotted line?		C																
Answer Options																					
Option A		Option B		Option C																	
 A.		 B.		 C.																	
				 D.																	

S.N	Folder Number & Question Code	Topic	Question with Answer Options	Image (If Any)	Correct Answer (Option-A,B,C,D)
8.	3_18 Mathematics 3172	Where to Look From	See the map of the park near Tutu's house. One day, Tutu stands in the SAND PIT and looks straight at the SLIDE. Which of these will be BEHIND him?	<p>The image shows a rectangular map of a park. At the top, there are two swings labeled 'SWING'. Below the swings is a slide labeled 'SLIDE'. In the center is an oval labeled 'SAND PIT'. To the right of the sand pit is a vertical rectangle labeled 'GATE'. At the bottom, there are four trees, with the rightmost one labeled 'TREE'.</p>	A
Answer Options					
Option A		Option B		Option C	
The gate		The Slide		The Trees	
Option D					
The Swings					
9.	2_11 Mathematics 4234	Where to Look From	Which shape is divided into two EQUAL parts by the dotted line?		D
Answer Options					
Option A		Option B		Option C	
<p>A. A.</p>		<p>B. B.</p>		<p>C. C.</p>	
Option D					
<p>D. D.</p>					

S.N	Folder Number & Question Code	Topic	Question with Answer Options	Image (If Any)	Correct Answer (Option-A,B,C,D)																
10	2_11 Mathematics 4239	Where to Look From	Which of these is the picture of a LEFT hand?		A																
Answer Options																					
Option A		Option B		Option C																	
																					
A.		B.		C.																	
Option D																					
																					
D.																					
11	3_19 Mathematics 2559	Where to Look From	See the pictures in the boxes below to answer the question. : Which three things are in ONE straight line?	<table border="1"> <tbody> <tr> <td></td> <td></td> <td></td> <td></td> </tr> <tr> <td></td> <td></td> <td></td> <td></td> </tr> <tr> <td></td> <td></td> <td></td> <td></td> </tr> <tr> <td></td> <td></td> <td></td> <td></td> </tr> </tbody> </table>																	D
																					
																					
																					
																					
Answer Options																					
Option A		Option B		Option C																	
The book, the house and the glass		The butterfly, the moon and the cup		The chair, the leaf and the pencil																	
Option D																					
The sun, the pen and the ice cream																					

S.N	Folder Number & Question Code	Topic	Question with Answer Options	Image (If Any)	Correct Answer (Option-A,B,C,D)				
12.	3_19 Mathematics 2564	Where to Look From	Lina writes the letter L on a piece of paper and then holds it in front of a mirror. What will she see in the mirror?		A				
						Answer Options			
						Option A	Option B	Option C	Option D
									
13.	5_27 Mathematics 8193	Where to Look From	In which of these pictures is there a glass under a table which is between 2 chairs?	-	D				
						Answer Options			
						Option A	Option B	Option C	Option D
									

S.N	Folder Number & Question Code	Topic	Question with Answer Options	Image (If Any)	Correct Answer (Option-A,B,C,D)		
14.	3_18 Mathematics 3165	Where to Look From	See the given picture T-shirt : Select the correct option which shows its mirror halve image?		B		
Answer Options							
Option A		Option B		Option C		Option D	
 A.							
15.	5_28 Mathematics 9868	Where to Look From	Which of the two fish shapes are the same?		D		
Answer Options							
Option A		Option B		Option C		Option D	
1 and 2		2 and 3		3 and 4		1 and 4	